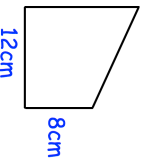
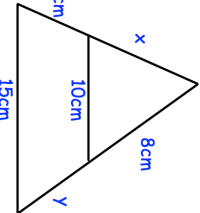

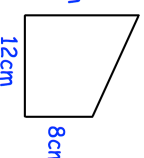
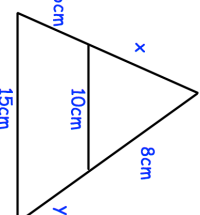



24th May		Corbettmaths
	<p>A frame is made from wire. The frame is a trapezium Calculate the total amount of wire needed to make the frame.</p> <p>Give your answer to 1 decimal place.</p>	<p>The equation below can have irrational or rational solutions.</p> $5x^2 = \frac{1}{a}$
<p>Write down a value for <b>a</b> which gives irrational solutions.</p>	<p>Write down a value for <b>a</b> which gives rational solutions.</p>	<p>Write down a value for <b>a</b> which gives no irrational solutions.</p>
	<p>Find x and y.</p>	
 <p>Calculate bearing of A from B.</p>		

24th May		Corbettmaths
	<p>A frame is made from wire. The frame is a trapezium Calculate the total amount of wire needed to make the frame.</p> <p>Give your answer to 1 decimal place.</p>	<p>The equation below can have irrational or rational solutions.</p> $5x^2 = \frac{1}{a}$
<p>Write down a value for <b>a</b> which gives irrational solutions.</p>	<p>Write down a value for <b>a</b> which gives rational solutions.</p>	<p>Write down a value for <b>a</b> which gives no irrational solutions.</p>
	<p>Find x and y.</p>	
 <p>Calculate bearing of A from B.</p>		