
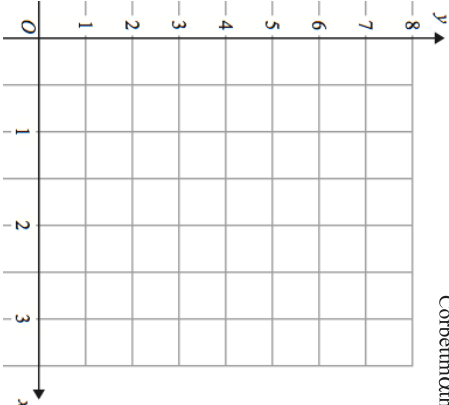
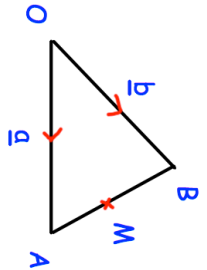

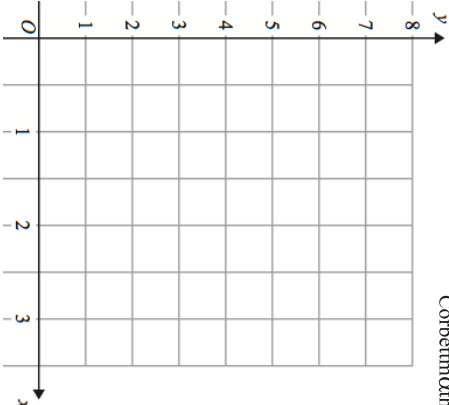


7th May	Corbettmaths 
Draw the graph $y = 2x + 1$	
Write down the gradient of a line perpendicular to the one drawn.	
Find y $7\frac{1}{2} + 1\frac{2}{3} = \frac{3}{8} \div y$	
Helen is making a loaf of bread. A loaf of bread loses 13% of its weight when it is baked. Helen wants the baked loaf to weigh 800g. Work out the weight of the loaf of bread before it is baked.	
M is the midpoint of AB. Find vector OM in terms of a and b .	

7th May	Corbettmaths 
Draw the graph $y = 2x + 1$	
Write down the gradient of a line perpendicular to the one drawn.	
Find y $7\frac{1}{2} + 1\frac{2}{3} = \frac{3}{8} \div y$	
Helen is making a loaf of bread. A loaf of bread loses 13% of its weight when it is baked. Helen wants the baked loaf to weigh 800g. Work out the weight of the loaf of bread before it is baked.	
M is the midpoint of AB. Find vector OM in terms of a and b .	