

Name: _____


5-a-day

Numeracy

1st May

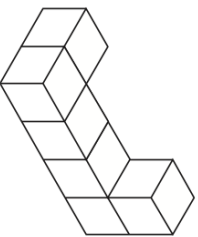
Write the number 1920 in words.

Corbettmaths



This square is drawn on a centimetre squared grid.

Find the area



This solid is made from one-centimetre cubes

Find the volume

List the first 5 square numbers

List the first 5 cube numbers

Ben, Carl, Ann and Ethan collect marbles.

Ben has 25 marbles.

Carl has 17 marbles more than Ben

Ann has twice as many marbles than Carl

Altogether they have 400 marbles.
How many marbles does Ethan have?

Name: _____


5-a-day

Numeracy

1st May

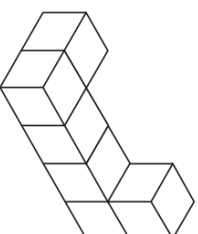
Write the number 1920 in words.

Corbettmaths



This square is drawn on a centimetre squared grid.

Find the area



This solid is made from one-centimetre cubes

Find the volume

List the first 5 square numbers

List the first 5 cube numbers

Ben, Carl, Ann and Ethan collect marbles.

Ben has 25 marbles.

Carl has 17 marbles more than Ben

Ann has twice as many marbles than Carl

Altogether they have 400 marbles.
How many marbles does Ethan have?