
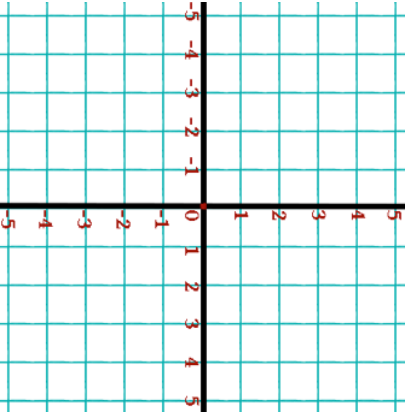
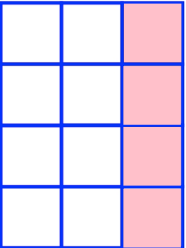


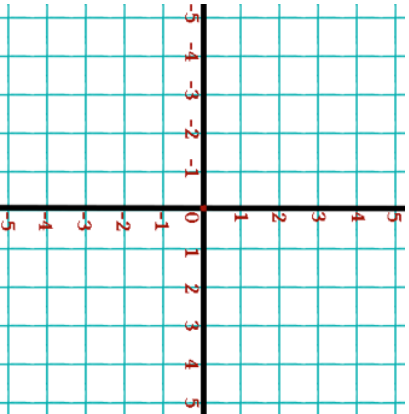
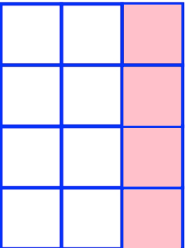


<p><b>10th May</b></p> <p style="text-align: right;">Corbettmaths </p>	
	<p>Plot these coordinates</p> <p>A(-3, -2) B(-1, -2) C(-1, 3) D(1, 3)</p>
<p>Write down the fraction of this shape that is <b>not</b> shaded.</p> <p>Give your fraction in its simplest form.</p>	
<p>Write 312,907 in words.</p>	<p>Write <b>four million, six hundred thousand</b> in figures</p>
<p>On the isometric grid, draw an isosceles triangle.</p>	

<p><b>10th May</b></p> <p style="text-align: right;">Corbettmaths </p>	
	<p>Plot these coordinates</p> <p>A(-3, -2) B(-1, -2) C(-1, 3) D(1, 3)</p>
<p>Write down the fraction of this shape that is <b>not</b> shaded.</p> <p>Give your fraction in its simplest form.</p>	
<p>Write 312,907 in words.</p>	<p>Write <b>four million, six hundred thousand</b> in figures</p>
<p>On the isometric grid, draw an isosceles triangle.</p>	