

Name: \_\_\_\_\_

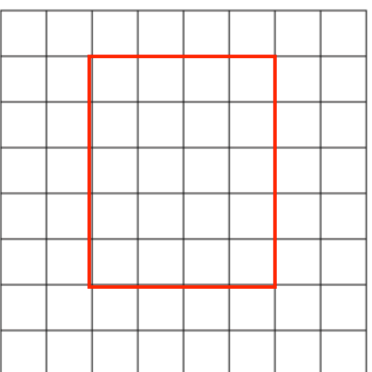
5-a-day

Numeracy

14th May



Find the perimeter of the rectangle

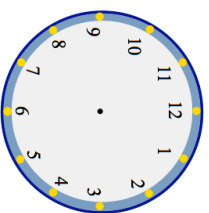


Draw the lines of symmetry on the rectangle

Work out  $132 \times 6$

Calculate  $2948 + 196$

Derek leaves his house at 09:15  
He arrives at work 25 minutes later.  
Show this time on the clock.



$\frac{2}{7}$  of 84 miles

Name: \_\_\_\_\_

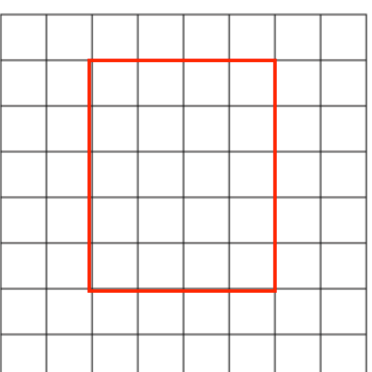
5-a-day

Numeracy

14th May



Find the perimeter of the rectangle

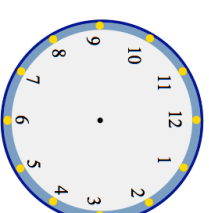


Draw the lines of symmetry on the rectangle

Work out  $132 \times 6$

Calculate  $2948 + 196$

Derek leaves his house at 09:15  
He arrives at work 25 minutes later.  
Show this time on the clock.



$\frac{2}{7}$  of 84 miles