

Name: _____

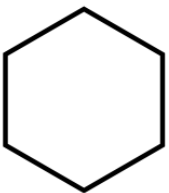
5-a-day

Numeracy

15th May

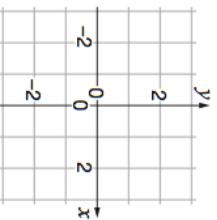


Draw a Kite



Name this shape _____

Plot the coordinate (-2, -1)



Work out $2741 - 1689$

Work out $102 \div 6$

Here are the first four terms of a number sequence.

7 10 13 16

Work out the difference between the 10th term and 15th term in the sequence.

A chocolate bar costs 68p.
Rosie buys 3 of these chocolate bars.

How much change should she receive from £1.0?

Name: _____

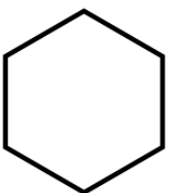
5-a-day

Numeracy

15th May

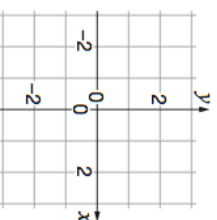


Draw a kite



Name this shape _____

Plot the coordinate (-2, -1)



Work out $2741 - 1689$

Work out $102 \div 6$

Here are the first four terms of a number sequence.

7 10 13 16

Work out the difference between the 10th term and 15th term in the sequence.

A chocolate bar costs 68p.
Rosie buys 3 of these chocolate bars.

How much change should she receive from £1.0?