

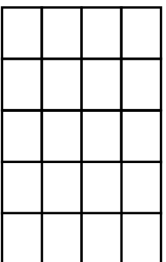
Name: _____

5-a-day

Numeracy

18th May

Shaded three fifths of this grid



What is the area?

What is the perimeter?

Draw on 1cm grid

Arrange the following numbers in order, from smallest to largest

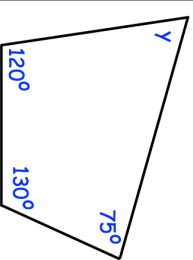
0.61 59% 0.6 62%

Which is better value for money?

Small pack
Contents
3 plates
£5.25



Large pack
Contents
12 plates
£21.24



Find the size of y

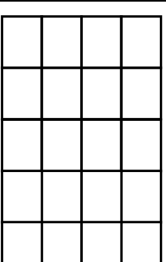
Name: _____

5-a-day

Numeracy

18th May

Shaded three fifths of this grid



What is the area?

What is the perimeter?

Draw on 1cm grid

Arrange the following numbers in order, from smallest to largest

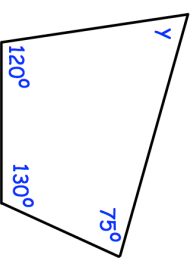
0.61 59% 0.6 62%

Which is better value for money?

Small pack
Contents
3 plates
£5.25



Large pack
Contents
12 plates
£21.24



Find the size of y