



Name: \_\_\_\_\_

5-a-day



Numeracy

22nd May		Corbettmaths
<p>2 6 7 <input type="checkbox"/></p> <p>5 6 1 <input type="checkbox"/></p> <p>9 7 8 <input type="checkbox"/></p> <p><input type="checkbox"/> <input type="checkbox"/> <input type="checkbox"/></p>	Find the row and column sums for the grid.	
<p>8 cm</p>  <p>10 cm</p>	Find the area Find the perimeter	
Write 49% as a decimal.	Write 0.72 as a percentage.	
<p>Jamie sat a test. The test had 80 questions, each worth one mark. He got 75% right.</p> <p>How many questions did Jamie get right?</p>		
<p>Arrange these lengths in order from shortest to longest.</p> <p>300 centimetres 2 metres 0.5 kilometres 9 millimetres</p>		

Name: \_\_\_\_\_

5-a-day

Numeracy

22nd May		Corbettmaths
<p>2 6 7 <input type="checkbox"/></p> <p>5 6 1 <input type="checkbox"/></p> <p>9 7 8 <input type="checkbox"/></p> <p><input type="checkbox"/> <input type="checkbox"/> <input type="checkbox"/></p>	Find the row and column sums for the grid.	
<p>8 cm</p>  <p>10 cm</p>	Find the area Find the perimeter	
Write 49% as a decimal.	Write 0.72 as a percentage.	
<p>Jamie sat a test. The test had 80 questions, each worth one mark. He got 75% right.</p> <p>How many questions did Jamie get right?</p>		
<p>Arrange these lengths in order from shortest to longest.</p> <p>300 centimetres 2 metres 0.5 kilometres 9 millimetres</p>		