

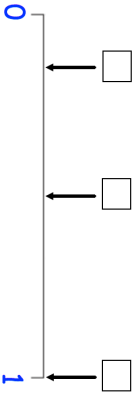


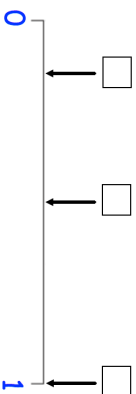


<b>24th May</b>	 Corbettmaths
Draw a shape with one line of symmetry	
What type of angle is shown?	
A fair six-sided dice is thrown.  The probabilities of the following events have been marked on the probability scale below.	
<b>A:</b> A number less than 7 is thrown. <b>B:</b> A "6" is thrown. <b>C:</b> An odd number is thrown.	 <p>Place the events A, B and C in the correct boxes.</p>
Work out $\sqrt{9}$	Work out $14^2$

<b>24th May</b>	 Corbettmaths
Draw a shape with one line of symmetry	
What type of angle is shown?	
A fair six-sided dice is thrown.  The probabilities of the following events have been marked on the probability scale below.	
<b>A:</b> A number less than 7 is thrown. <b>B:</b> A "6" is thrown. <b>C:</b> An odd number is thrown.	 <p>Place the events A, B and C in the correct boxes.</p>
Work out $\sqrt{9}$	Work out $14^2$