

Name: _____


5-a-day

Numeracy

26th May

List the square numbers between 20 and 60.

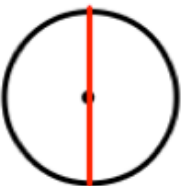
List the prime numbers between 20 and 30.



What fraction of the discs are red?
Simplify your answer.

Work out $8348 - 2542$

The red lines shows which part of a circle?



Write 0.17 as a fraction

Write three fifths as a decimal

Name: _____


5-a-day

Numeracy

26th May

List the square numbers between 20 and 60.

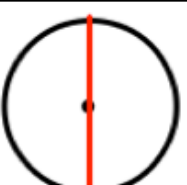
List the prime numbers between 20 and 30.



What fraction of the discs are red?
Simplify your answer.

Work out $8348 - 2542$

The red lines shows which part of a circle?



Write 0.17 as a fraction

Write three fifths as a decimal