

Name: _____

5-a-day

Numeracy

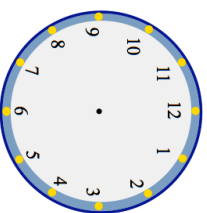
28th May

$6000 \div 100$

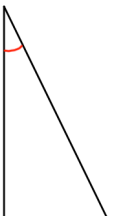
$50 \div 10$

Corbettmaths

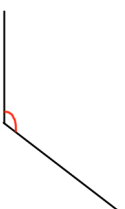
Show the time 6:55pm on the clock



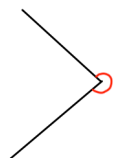
Answer angle



Answer angle



Answer angle



Answer angle

Name the types of angle shown above

Eight people book a holiday, costing \$284 each. How much is the total cost?

Name: _____

5-a-day

Numeracy


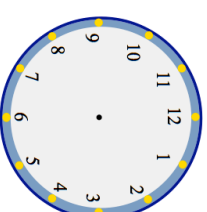
28th May

$6000 \div 100$

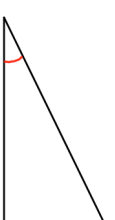
$50 \div 10$

Corbettmaths

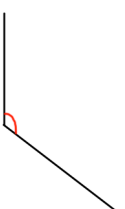
Show the time 6:55pm on the clock



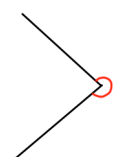
Answer angle



Answer angle



Answer angle



Answer angle

Name the types of angle shown above

Eight people book a holiday, costing \$284 each. How much is the total cost?