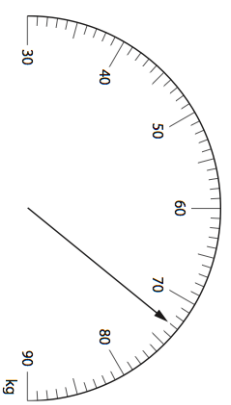

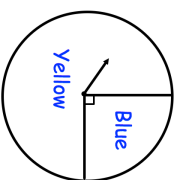


Name: _____

5-a-day

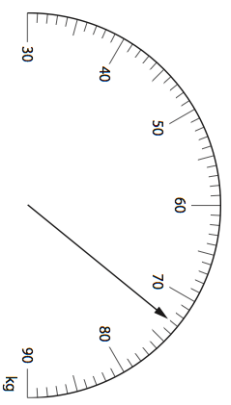
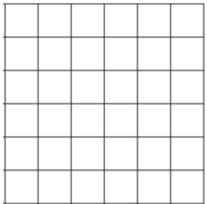
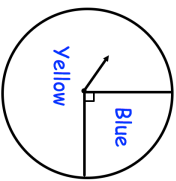
Numeracy

<p>31st May</p> <p>Corbettmaths</p> 	<p>What weight is shown on the scales?</p>
<p>Express 50p as a fraction of £4</p> <p>Give your answer in its simplest form.</p>	
<p>On the grid, draw a right angled triangle.</p>	
<p>2 birthday cards at £2.70 each</p> <p>1 toy at £6.50 each</p> <p>1 book at £5.75 each</p> <p>Hannah pays with a £50 note.</p> <p>How much change does she get?</p>	
	<p>The fair spinner is spun once.</p> <p>What is the probability the spinner lands on Yellow?</p>

Name: _____

5-a-day

Numeracy

<p>31st May</p> <p>Corbettmaths</p> 	<p>What weight is shown on the scales?</p>
<p>Express 50p as a fraction of £4</p> <p>Give your answer in its simplest form.</p>	
<p>On the grid, draw a right angled triangle.</p>	
<p>2 birthday cards at £2.70 each</p> <p>1 toy at £6.50 each</p> <p>1 book at £5.75 each</p> <p>Hannah pays with a £50 note.</p> <p>How much change does she get?</p>	
	<p>The fair spinner is spun once.</p> <p>What is the probability the spinner lands on Yellow?</p>