

Name: \_\_\_\_\_

5-a-day

Numeracy



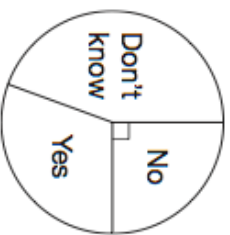
6th May

Write down the value of 55 twenty pence pieces

Corbettmaths

Write  $\frac{3}{5}$  as a decimal

Write  $\frac{3}{5}$  as a percentage



If 60 people were surveyed, how many said 'No'?



Work out the area of the rectangle

Work out the perimeter of the rectangle

Name: \_\_\_\_\_

5-a-day

Numeracy



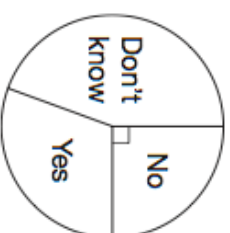
6th May

Write down the value of 55 twenty pence pieces

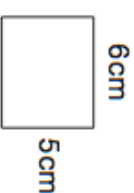
Corbettmaths

Write  $\frac{3}{5}$  as a decimal

Write  $\frac{3}{5}$  as a percentage



If 60 people were surveyed, how many said 'No'?



Work out the area of the rectangle

Work out the perimeter of the rectangle