

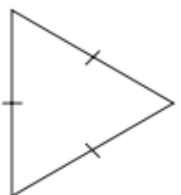
Name: \_\_\_\_\_

5-a-day

Numeracy


8th May

What type of triangle is shown?



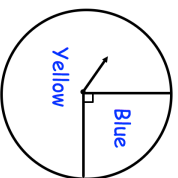
What is the size of each angle in the triangle above.

3cm



Not drawn accurately

Work out the area of the square.



The fair spinner is spun once.  
What is the probability the spinner lands on Blue?

A bus to Belfast leaves Antrim Bus Station every 25 minutes.  
The first bus each day leaves at 7am.  
Darren wants to get a bus after 8am.  
What time is the first suitable bus?

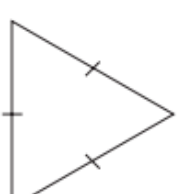
Name: \_\_\_\_\_

5-a-day

Numeracy


8th May

What type of triangle is shown?



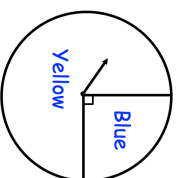
What is the size of each angle in the triangle above.

3cm



Not drawn accurately

Work out the area of the square.



The fair spinner is spun once.  
What is the probability the spinner lands on Blue?

A bus to Belfast leaves Antrim Bus Station every 25 minutes.  
The first bus each day leaves at 7am.  
Darren wants to get a bus after 8am.  
What time is the first suitable bus?