
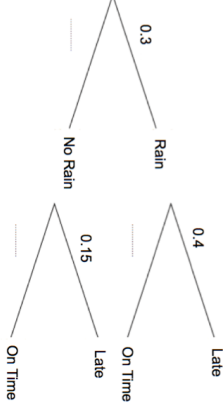
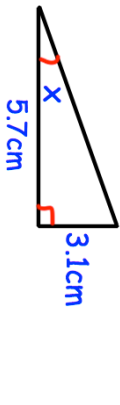

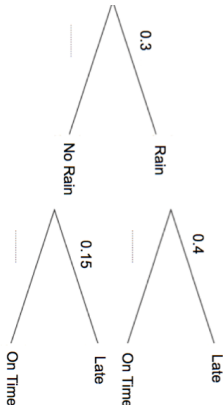
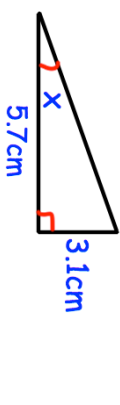


10th November	 Corbettmaths
$A = 6 \times 10^5$ $B = 30000$ $C = 5 \times 10^2$	Work out AB
A line has gradient 3 and passes through the point (1, 5) Find the equation of the line.	
	In a small village, one bus arrives a day. The probability of rain in the village is 0.3. If it rains, the probability of a bus being late is 0.4. If it does not rain, the probability of a bus being late is 0.15.
Complete the tree diagram.	Work out the number of days the bus will be late over a period of 160 days.
	Find x

10th November	 Corbettmaths
$A = 6 \times 10^5$ $B = 30000$ $C = 5 \times 10^2$	Work out AB
A line has gradient 3 and passes through the point (1, 5) Find the equation of the line.	
	In a small village, one bus arrives a day. The probability of rain in the village is 0.3. If it rains, the probability of a bus being late is 0.4. If it does not rain, the probability of a bus being late is 0.15.
Complete the tree diagram.	Work out the number of days the bus will be late over a period of 160 days.
	Find x