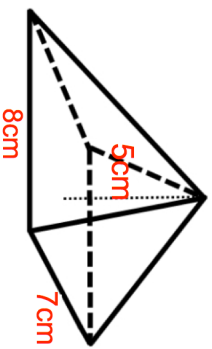


11th November



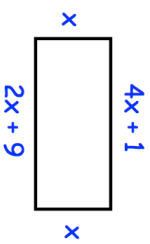
Calculate the volume of the pyramid



length, $L$ , cm	Frequency
$0 < L \leq 10$	21
$10 < L \leq 20$	11
$20 < L \leq 30$	31
$30 < L \leq 40$	12
$40 < L \leq 50$	25

What is the modal interval?

Calculate an estimate of the mean.



Find the perimeter of the rectangle

At a concert

the ratio of men to women is 4:5  
 the ratio of children to women is 2:1

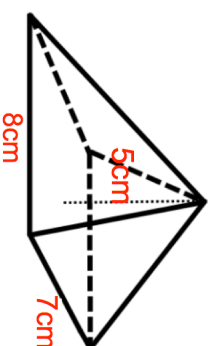
How many women are at the concert?

There are 475 people at the concert.

11th November



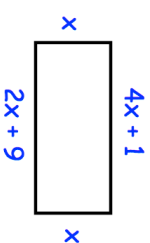
Calculate the volume of the pyramid



length, $L$ , cm	Frequency
$0 < L \leq 10$	21
$10 < L \leq 20$	11
$20 < L \leq 30$	31
$30 < L \leq 40$	12
$40 < L \leq 50$	25

What is the modal interval?

Calculate an estimate of the mean.



Find the perimeter of the rectangle

At a concert

the ratio of men to women is 4:5  
 the ratio of children to women is 2:1

How many women are at the concert?

There are 475 people at the concert.