





13th November		 Corbettmaths														
A dog runs 400 metres in 50 seconds.																
Calculate the speed of the dog in km/h																
$y = \frac{1}{x}$																
Complete the table of values and draw a graph																
<table border="1"> <tr> <td>x</td> <td>0.5</td> <td>1</td> <td>2</td> <td>3</td> <td>4</td> <td>5</td> </tr> <tr> <td>y</td> <td></td> <td></td> <td></td> <td></td> <td></td> <td></td> </tr> </table>	x	0.5	1	2	3	4	5	y								
x	0.5	1	2	3	4	5										
y																
Simon rolls a fair six-sided dice 30 times. He records the results in a table, however misses two of the frequencies. The mean result is 3.5		<table border="1"> <thead> <tr> <th>Number</th> <th>Frequency</th> </tr> </thead> <tbody> <tr> <td>1</td> <td>6</td> </tr> <tr> <td>2</td> <td>3</td> </tr> <tr> <td>3</td> <td>5</td> </tr> <tr> <td>4</td> <td></td> </tr> <tr> <td>5</td> <td></td> </tr> <tr> <td>6</td> <td>6</td> </tr> </tbody> </table>	Number	Frequency	1	6	2	3	3	5	4		5		6	6
Number	Frequency															
1	6															
2	3															
3	5															
4																
5																
6	6															
Work out the two missing numbers.																

13th November		 Corbettmaths														
A dog runs 400 metres in 50 seconds.																
Calculate the speed of the dog in km/h																
$y = \frac{1}{x}$																
Complete the table of values and draw a graph																
<table border="1"> <tr> <td>x</td> <td>0.5</td> <td>1</td> <td>2</td> <td>3</td> <td>4</td> <td>5</td> </tr> <tr> <td>y</td> <td></td> <td></td> <td></td> <td></td> <td></td> <td></td> </tr> </table>	x	0.5	1	2	3	4	5	y								
x	0.5	1	2	3	4	5										
y																
Simon rolls a fair six-sided dice 30 times. He records the results in a table, however misses two of the frequencies. The mean result is 3.5		<table border="1"> <thead> <tr> <th>Number</th> <th>Frequency</th> </tr> </thead> <tbody> <tr> <td>1</td> <td>6</td> </tr> <tr> <td>2</td> <td>3</td> </tr> <tr> <td>3</td> <td>5</td> </tr> <tr> <td>4</td> <td></td> </tr> <tr> <td>5</td> <td></td> </tr> <tr> <td>6</td> <td>6</td> </tr> </tbody> </table>	Number	Frequency	1	6	2	3	3	5	4		5		6	6
Number	Frequency															
1	6															
2	3															
3	5															
4																
5																
6	6															
Work out the two missing numbers.																