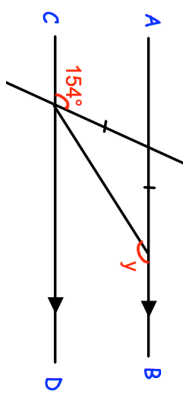

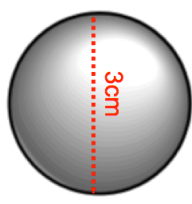
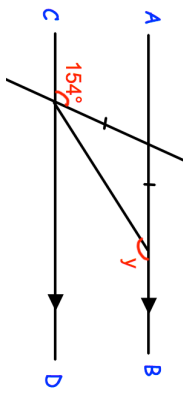

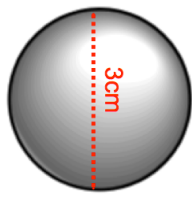


14th November		Corbettmaths												
	AB is parallel to CD. Work out the size of angle y .													
Here are the n th terms of 4 sequences. <table border="0" style="width: 100%;"> <tr> <td>Sequence 1</td> <td>nth term</td> <td>$4n + 3$</td> </tr> <tr> <td>Sequence 2</td> <td>nth term</td> <td>$7n + 1$</td> </tr> <tr> <td>Sequence 3</td> <td>nth term</td> <td>$14n$</td> </tr> <tr> <td>Sequence 4</td> <td>nth term</td> <td>$8n - 1$</td> </tr> </table>	Sequence 1	n th term	$4n + 3$	Sequence 2	n th term	$7n + 1$	Sequence 3	n th term	$14n$	Sequence 4	n th term	$8n - 1$	Sequence 1 Sequence 2 Sequence 3 Sequence 4	
Sequence 1	n th term	$4n + 3$												
Sequence 2	n th term	$7n + 1$												
Sequence 3	n th term	$14n$												
Sequence 4	n th term	$8n - 1$												
For each sequence state whether the numbers in the sequence are <table border="0" style="width: 100%;"> <tr> <td>A</td> <td>Always multiples of 7</td> </tr> <tr> <td>S</td> <td>Sometimes multiples of 7</td> </tr> <tr> <td>N</td> <td>Never multiples of 7</td> </tr> </table>	A	Always multiples of 7	S	Sometimes multiples of 7	N	Never multiples of 7	Sequence 3 Sequence 4							
A	Always multiples of 7													
S	Sometimes multiples of 7													
N	Never multiples of 7													
7.5 has been rounded to one decimal place. Write down an inequality to show the range of possible actual values.														
	Calculate the volume of the sphere. Give your answer to 1 decimal place.													

14th November		Corbettmaths												
	AB is parallel to CD. Work out the size of angle y .													
Here are the n th terms of 4 sequences. <table border="0" style="width: 100%;"> <tr> <td>Sequence 1</td> <td>nth term</td> <td>$4n + 3$</td> </tr> <tr> <td>Sequence 2</td> <td>nth term</td> <td>$7n + 1$</td> </tr> <tr> <td>Sequence 3</td> <td>nth term</td> <td>$14n$</td> </tr> <tr> <td>Sequence 4</td> <td>nth term</td> <td>$8n - 1$</td> </tr> </table>	Sequence 1	n th term	$4n + 3$	Sequence 2	n th term	$7n + 1$	Sequence 3	n th term	$14n$	Sequence 4	n th term	$8n - 1$	Sequence 1 Sequence 2 Sequence 3 Sequence 4	
Sequence 1	n th term	$4n + 3$												
Sequence 2	n th term	$7n + 1$												
Sequence 3	n th term	$14n$												
Sequence 4	n th term	$8n - 1$												
For each sequence state whether the numbers in the sequence are <table border="0" style="width: 100%;"> <tr> <td>A</td> <td>Always multiples of 7</td> </tr> <tr> <td>S</td> <td>Sometimes multiples of 7</td> </tr> <tr> <td>N</td> <td>Never multiples of 7</td> </tr> </table>	A	Always multiples of 7	S	Sometimes multiples of 7	N	Never multiples of 7	Sequence 3 Sequence 4							
A	Always multiples of 7													
S	Sometimes multiples of 7													
N	Never multiples of 7													
7.5 has been rounded to one decimal place. Write down an inequality to show the range of possible actual values.														
	Calculate the volume of the sphere. Give your answer to 1 decimal place.													