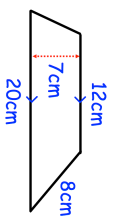
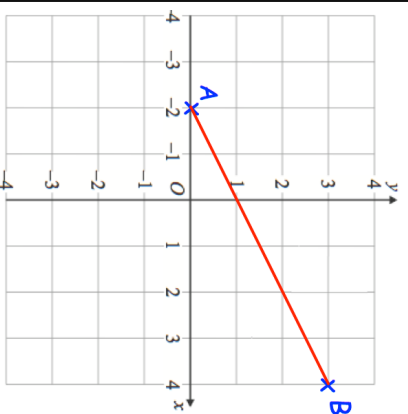


25th November

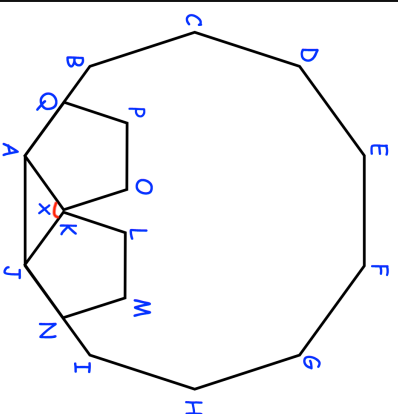


Find the area of the trapezium

Find the gradient of the line AB

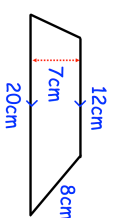


Find the midpoint of the line AB



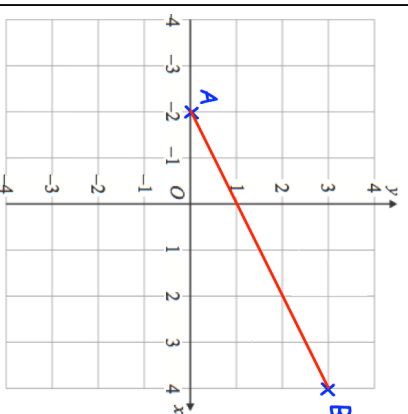
ABCDEFGHIJ is a regular decagon
JKLMN and AKOPQ are congruent
regular pentagons.
Find x.

25th November

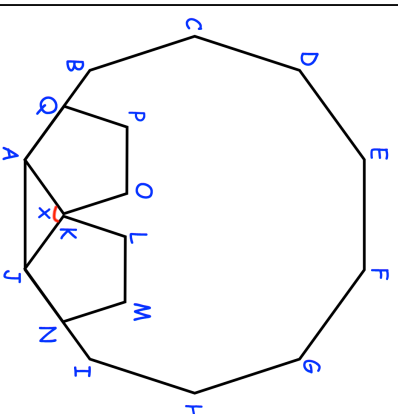


Find the area of the trapezium

Find the gradient of the line AB



Find the midpoint of the line AB



ABCDEFGHIJ is a regular decagon
JKLMN and AKOPQ are congruent
regular pentagons.
Find x.