
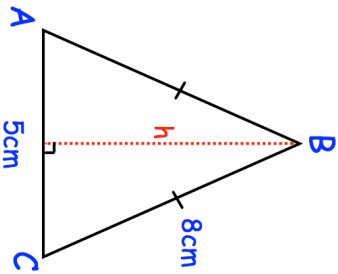


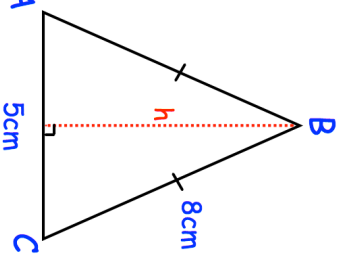



30th November																	
Expand $(x + 4)(x - 3)$	Expand $(2x - 3)^2$	Corbettmaths															
 <p>ABC is an isosceles triangle. $AB = BC = 8\text{cm}$ $AC = 5\text{cm}$</p>	Calculate the height of the triangle, h .																
	Calculate the area of the triangle.																
$y = \frac{1}{x}$ <p>Complete the table of values and draw a graph</p> <table border="1" data-bbox="295 145 367 548"> <tr> <td>x</td> <td>0.5</td> <td>1</td> <td>2</td> <td>3</td> <td>4</td> <td>5</td> </tr> <tr> <td>y</td> <td></td> <td></td> <td></td> <td></td> <td></td> <td></td> </tr> </table>	x	0.5	1	2	3	4	5	y									
x	0.5	1	2	3	4	5											
y																	

30th November																	
Expand $(x + 4)(x - 3)$	Expand $(2x - 3)^2$	Corbettmaths															
 <p>ABC is an isosceles triangle. $AB = BC = 8\text{cm}$ $AC = 5\text{cm}$</p>	Calculate the height of the triangle, h .																
	Calculate the area of the triangle.																
$y = \frac{1}{x}$ <p>Complete the table of values and draw a graph</p> <table border="1" data-bbox="295 1243 367 1646"> <tr> <td>x</td> <td>0.5</td> <td>1</td> <td>2</td> <td>3</td> <td>4</td> <td>5</td> </tr> <tr> <td>y</td> <td></td> <td></td> <td></td> <td></td> <td></td> <td></td> </tr> </table>	x	0.5	1	2	3	4	5	y									
x	0.5	1	2	3	4	5											
y																	