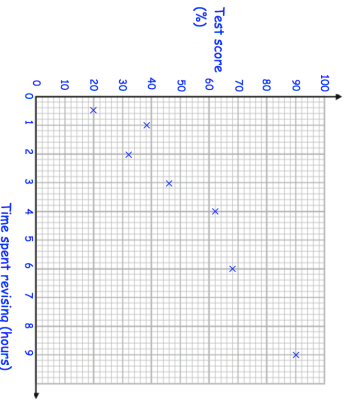
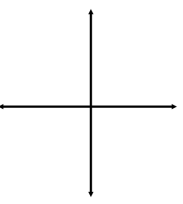
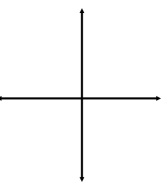
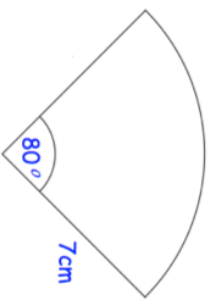
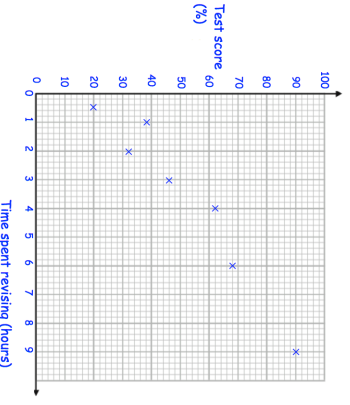
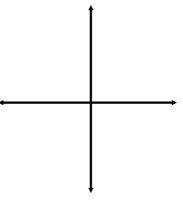
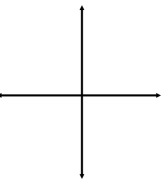
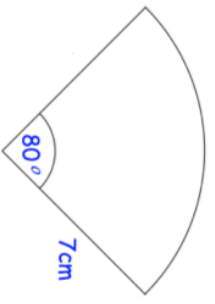


4th November		Corbettmaths	
<p>The table shows the time spent revising and the test scores of seven students.</p> 	<p>Another student has spent 4.5 hours revising. Estimate their test result.</p>	<p>A student scored 55% Estimate how much time they spent revising.</p>	
	<p>Sketch $y = x^3$</p>		<p>Sketch $y = \frac{1}{x}$ where $x \neq 0$</p>
<p>A line has equation $y = 5x - 4$ Write down the gradient of the line</p>	<p>Write down the y-intercept of the line</p>	<p>Write down the y-intercept of the line</p>	
	<p>Calculate the perimeter of this sector.</p>		

4th November		Corbettmaths	
<p>The table shows the time spent revising and the test scores of seven students.</p> 	<p>Another student has spent 4.5 hours revising. Estimate their test result.</p>	<p>A student scored 55% Estimate how much time they spent revising.</p>	
	<p>Sketch $y = x^3$</p>		<p>Sketch $y = \frac{1}{x}$ where $x \neq 0$</p>
<p>A line has equation $y = 5x - 4$ Write down the gradient of the line</p>	<p>Write down the y-intercept of the line</p>	<p>Write down the y-intercept of the line</p>	
	<p>Calculate the perimeter of this sector.</p>		