
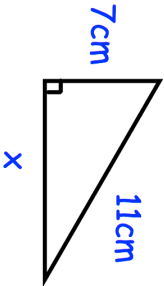

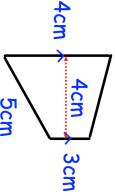

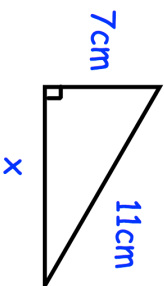

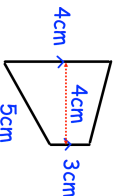


6th November	 Corbettmaths
Calculate the difference between the 30 th term and 60 th term of the sequence 8, 3, -2, -7,	
	Find x
Peter has multiplied two numbers using his calculator. The calculator shows the answer. He can remember that one number was 5000. What was the other number used in the multiplication?	
	The trapezium below is enlarged by scale factor 3. Work out the area of the enlarged trapezium.
Shop A 50% extra free Only £40	Shop B Buy one get the second HALF PRICE Normal price £40 for 100ml Which is best value for money?

6th November	 Corbettmaths
Calculate the difference between the 30 th term and 60 th term of the sequence 8, 3, -2, -7,	
	Find x
Peter has multiplied two numbers using his calculator. The calculator shows the answer. He can remember that one number was 5000. What was the other number used in the multiplication?	
	The trapezium below is enlarged by scale factor 3. Work out the area of the enlarged trapezium.
Shop A 50% extra free Only £40	Shop B Buy one get the second HALF PRICE Normal price £40 for 100ml Which is best value for money?