

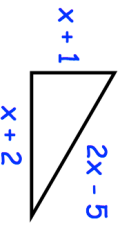


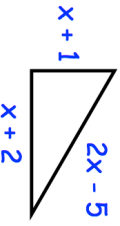


21st November		Corbettmaths															
Solve	$x^2 > 7x + 18$																
 4 Litres  108 Litres		Two barrels are mathematically similar. It takes 80ml of paint to paint the smaller barrel. How much paint is needed for the larger barrel.															
<table border="1"> <thead> <tr> <th>Age (A years)</th> <th>Frequency</th> </tr> </thead> <tbody> <tr> <td>$20 < A \leq 25$</td> <td>145</td> </tr> <tr> <td>$25 < A \leq 30$</td> <td>200</td> </tr> <tr> <td>$30 < A \leq 35$</td> <td>94</td> </tr> <tr> <td>$35 < A \leq 40$</td> <td>141</td> </tr> <tr> <td>$40 < A \leq 45$</td> <td>294</td> </tr> <tr> <td>$45 < A \leq 50$</td> <td>326</td> </tr> </tbody> </table>	Age (A years)	Frequency	$20 < A \leq 25$	145	$25 < A \leq 30$	200	$30 < A \leq 35$	94	$35 < A \leq 40$	141	$40 < A \leq 45$	294	$45 < A \leq 50$	326		Calculate an estimate of the upper quartile.	
Age (A years)	Frequency																
$20 < A \leq 25$	145																
$25 < A \leq 30$	200																
$30 < A \leq 35$	94																
$35 < A \leq 40$	141																
$40 < A \leq 45$	294																
$45 < A \leq 50$	326																
Shown is a right angled triangle. Find the possible value(s) of x.																	
Solve the simultaneous equations																	
$x - y = 3$																	
$x^2 + y^2 = 89$																	

21st November		Corbettmaths															
Solve	$x^2 > 7x + 18$																
 4 Litres  108 Litres		Two barrels are mathematically similar. It takes 80ml of paint to paint the smaller barrel. How much paint is needed for the larger barrel.															
<table border="1"> <thead> <tr> <th>Age (A years)</th> <th>Frequency</th> </tr> </thead> <tbody> <tr> <td>$20 < A \leq 25$</td> <td>145</td> </tr> <tr> <td>$25 < A \leq 30$</td> <td>200</td> </tr> <tr> <td>$30 < A \leq 35$</td> <td>94</td> </tr> <tr> <td>$35 < A \leq 40$</td> <td>141</td> </tr> <tr> <td>$40 < A \leq 45$</td> <td>294</td> </tr> <tr> <td>$45 < A \leq 50$</td> <td>326</td> </tr> </tbody> </table>	Age (A years)	Frequency	$20 < A \leq 25$	145	$25 < A \leq 30$	200	$30 < A \leq 35$	94	$35 < A \leq 40$	141	$40 < A \leq 45$	294	$45 < A \leq 50$	326		Calculate an estimate of the upper quartile.	
Age (A years)	Frequency																
$20 < A \leq 25$	145																
$25 < A \leq 30$	200																
$30 < A \leq 35$	94																
$35 < A \leq 40$	141																
$40 < A \leq 45$	294																
$45 < A \leq 50$	326																
Shown is a right angled triangle. Find the possible value(s) of x.																	
Solve the simultaneous equations																	
$x - y = 3$																	
$x^2 + y^2 = 89$																	