
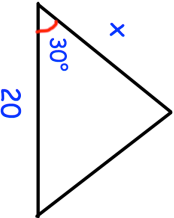
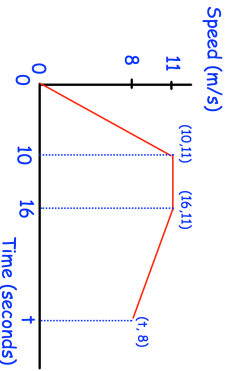

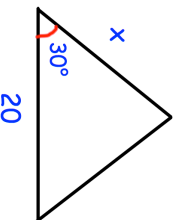
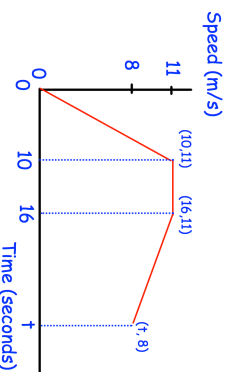


3rd November	Corbettmaths 
	Find the area of the triangle in terms of $x$ .
<p>Given</p> $y = \frac{3\sqrt{2}}{2}$ <p>Write an expression for <math>y^3</math></p>	
 <p>The average speed from 0 to <math>t</math> seconds was 8.725m/s</p>	Find $t$  Find the acceleration for the first 10 seconds of the journey.
Find the $n$ th term of the sequence 9 10 13 18 25 ...	

3rd November	Corbettmaths 
	Find the area of the triangle in terms of $x$ .
<p>Given</p> $y = \frac{3\sqrt{2}}{2}$ <p>Write an expression for <math>y^3</math></p>	
 <p>The average speed from 0 to <math>t</math> seconds was 8.725m/s</p>	Find $t$  Find the acceleration for the first 10 seconds of the journey.
Find the $n$ th term of the sequence 9 10 13 18 25 ...	