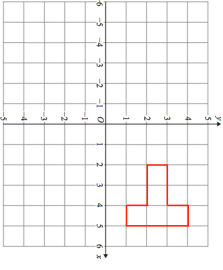
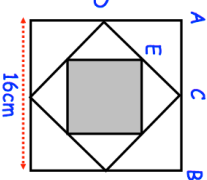
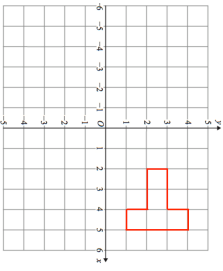
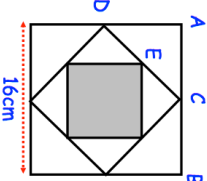


<p>30th November</p> 	<p>Describe fully a single transformation for which there is one invariant point</p> <p style="text-align: right;">Corbettmaths</p>
<p>Solve</p> $x^2 - 5x + 4 < 0$	
<p>The midpoints of the sides of a square of side 16cm are joined to form another square. This process is then repeated to create the shaded square.</p> <p>Find the area of the shaded square.</p>	
<p>Solve</p> $\frac{4}{x+1} + \frac{2}{x-2} = 3$	
<p>An octagonal pyramid has a base that is a regular octagon with side length 20cm. The perpendicular height of the pyramid is 75cm.</p>	<p>Find the volume of the pyramid</p>

<p>30th November</p> 	<p>Describe fully a single transformation for which there is one invariant point</p> <p style="text-align: right;">Corbettmaths</p>
<p>Solve</p> $x^2 - 5x + 4 < 0$	
<p>The midpoints of the sides of a square of side 16cm are joined to form another square. This process is then repeated to create the shaded square.</p> <p>Find the area of the shaded square.</p>	
<p>Solve</p> $\frac{4}{x+1} + \frac{2}{x-2} = 3$	
<p>An octagonal pyramid has a base that is a regular octagon with side length 20cm. The perpendicular height of the pyramid is 75cm.</p>	<p>Find the volume of the pyramid</p>