
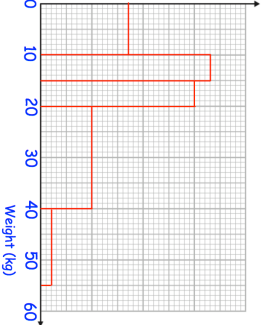

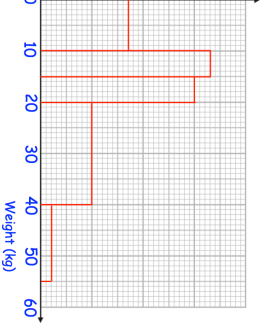


13th November Evaluate 81 0.5	Corbettmaths 												
Which of these points is not 10 units from the point (0, 1)? (10, 1) (6, 9) (1, 11) (0, -9) (-8, 7) (-10, 1)													
	Use the information in the histogram to complete the frequency table.												
A restaurant menu has 6 starters, 9 mains and 7 desserts. A customer can choose: - a starter and a main - a main and a dessert - a starter, a main and a dessert	How many different ways of choosing a meal are there?												
	<table border="1"> <thead> <tr> <th>weight (w kg)</th> <th>Frequency</th> </tr> </thead> <tbody> <tr> <td>$0 < w \leq 10$</td> <td>34</td> </tr> <tr> <td>$10 < w \leq 15$</td> <td>33</td> </tr> <tr> <td>$15 < w \leq 20$</td> <td></td> </tr> <tr> <td>$20 < w \leq 40$</td> <td></td> </tr> <tr> <td>$40 < w \leq 55$</td> <td>6</td> </tr> </tbody> </table>	weight (w kg)	Frequency	$0 < w \leq 10$	34	$10 < w \leq 15$	33	$15 < w \leq 20$		$20 < w \leq 40$		$40 < w \leq 55$	6
weight (w kg)	Frequency												
$0 < w \leq 10$	34												
$10 < w \leq 15$	33												
$15 < w \leq 20$													
$20 < w \leq 40$													
$40 < w \leq 55$	6												

13th November Evaluate 81 0.5	Corbettmaths 												
Which of these points is not 10 units from the point (0, 1)? (10, 1) (6, 9) (1, 11) (0, -9) (-8, 7) (-10, 1)													
	Use the information in the histogram to complete the frequency table.												
A restaurant menu has 6 starters, 9 mains and 7 desserts. A customer can choose: - a starter and a main - a main and a dessert - a starter, a main and a dessert	How many different ways of choosing a meal are there?												
	<table border="1"> <thead> <tr> <th>weight (w kg)</th> <th>Frequency</th> </tr> </thead> <tbody> <tr> <td>$0 < w \leq 10$</td> <td>34</td> </tr> <tr> <td>$10 < w \leq 15$</td> <td>33</td> </tr> <tr> <td>$15 < w \leq 20$</td> <td></td> </tr> <tr> <td>$20 < w \leq 40$</td> <td></td> </tr> <tr> <td>$40 < w \leq 55$</td> <td>6</td> </tr> </tbody> </table>	weight (w kg)	Frequency	$0 < w \leq 10$	34	$10 < w \leq 15$	33	$15 < w \leq 20$		$20 < w \leq 40$		$40 < w \leq 55$	6
weight (w kg)	Frequency												
$0 < w \leq 10$	34												
$10 < w \leq 15$	33												
$15 < w \leq 20$													
$20 < w \leq 40$													
$40 < w \leq 55$	6												