
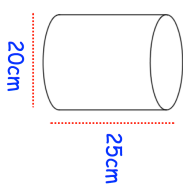

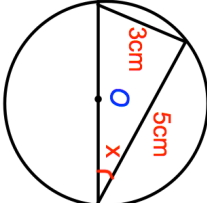


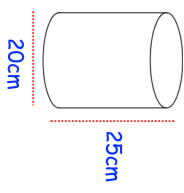

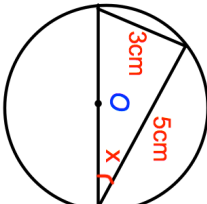


3rd November	Calculate the volume of the cylinder.	 Corbettmaths
		
<p>16 cylinders are placed in a box of height 30cm as shown.</p> <p>Calculate the percentage of the box that is not filled by the cylinders.</p>	Find x	
	<p>Factorise</p> $2x^2 - 7x - 15$	<p>Mrs Jenkins is making decorations for a wedding. She needs <math>18\sqrt{5}</math> metres of ribbon in total. Mrs Jenkins has 40 metres of ribbon. Does she have enough ribbon?</p> 

3rd November	Calculate the volume of the cylinder.	 Corbettmaths
		
<p>16 cylinders are placed in a box of height 30cm as shown.</p> <p>Calculate the percentage of the box that is not filled by the cylinders.</p>	Find x	
	<p>Factorise</p> $2x^2 - 7x - 15$	<p>Mrs Jenkins is making decorations for a wedding. She needs <math>18\sqrt{5}</math> metres of ribbon in total. Mrs Jenkins has 40 metres of ribbon. Does she have enough ribbon?</p> 