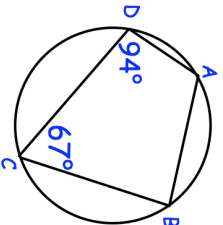
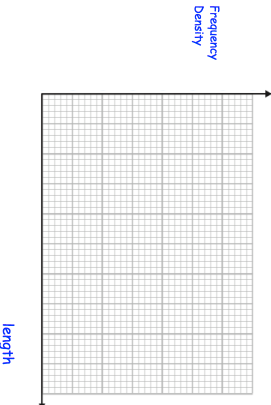
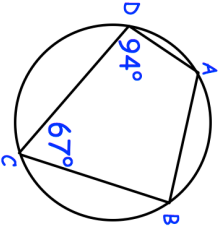
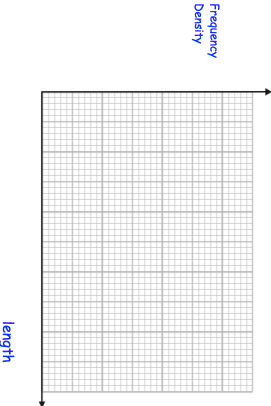


7th November		Corbettmaths											
	Find angle DAB. Find angle ABC.												
Work out $16^{1.5} + 8^0$													
<table border="1"> <thead> <tr> <th>Length, l</th> <th>Frequency</th> </tr> </thead> <tbody> <tr> <td>$0 < l \leq 4$</td> <td>36</td> </tr> <tr> <td>$4 < l \leq 6$</td> <td>40</td> </tr> <tr> <td>$6 < l \leq 8$</td> <td>48</td> </tr> <tr> <td>$8 < l \leq 12$</td> <td>44</td> </tr> <tr> <td>$12 < l \leq 20$</td> <td>32</td> </tr> </tbody> </table>	Length, l	Frequency	$0 < l \leq 4$	36	$4 < l \leq 6$	40	$6 < l \leq 8$	48	$8 < l \leq 12$	44	$12 < l \leq 20$	32	
Length, l	Frequency												
$0 < l \leq 4$	36												
$4 < l \leq 6$	40												
$6 < l \leq 8$	48												
$8 < l \leq 12$	44												
$12 < l \leq 20$	32												
Draw a histogram for this data.													
The length of a line is 24 centimetres, correct to the nearest centimetre. Write down the least possible length of the line.	Write down the greatest possible length of the line.												

7th November		Corbettmaths											
	Find angle DAB. Find angle ABC.												
Work out $16^{1.5} + 8^0$													
<table border="1"> <thead> <tr> <th>Length, l</th> <th>Frequency</th> </tr> </thead> <tbody> <tr> <td>$0 < l \leq 4$</td> <td>36</td> </tr> <tr> <td>$4 < l \leq 6$</td> <td>40</td> </tr> <tr> <td>$6 < l \leq 8$</td> <td>48</td> </tr> <tr> <td>$8 < l \leq 12$</td> <td>44</td> </tr> <tr> <td>$12 < l \leq 20$</td> <td>32</td> </tr> </tbody> </table>	Length, l	Frequency	$0 < l \leq 4$	36	$4 < l \leq 6$	40	$6 < l \leq 8$	48	$8 < l \leq 12$	44	$12 < l \leq 20$	32	
Length, l	Frequency												
$0 < l \leq 4$	36												
$4 < l \leq 6$	40												
$6 < l \leq 8$	48												
$8 < l \leq 12$	44												
$12 < l \leq 20$	32												
Draw a histogram for this data.													
The length of a line is 24 centimetres, correct to the nearest centimetre. Write down the least possible length of the line.	Write down the greatest possible length of the line.												