

Name: \_\_\_\_\_

5-a-day

Numeracy



Corbettmaths


1st November

A minibus can hold 16 passengers.

How many passengers can travel in 9 minibuses?

Find the perimeter of the rectangle.


8cm



3cm

Draw a 120 degree angle

Shade two more squares so that the shaded shape is a net of a cube.



Shade six more squares to create a different net of a cube.



Name: \_\_\_\_\_

5-a-day

Numeracy



Corbettmaths


1st November

A minibus can hold 16 passengers.

How many passengers can travel in 9 minibuses?

Find the perimeter of the rectangle.


8cm



3cm

Draw a 120 degree angle

Shade two more squares so that the shaded shape is a net of a cube.



Shade six more squares to create a different net of a cube.

