

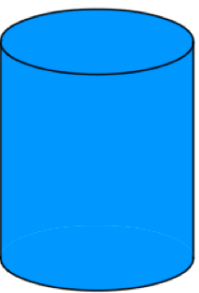
17th November



Write down the value of digit 4.

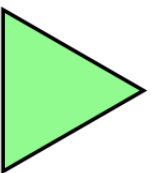
3942

Name this solid



$$\frac{3}{15} = \frac{12}{\square}$$

$$\frac{12}{20} = \frac{\square}{5}$$

Shown is an equilateral triangle.  
Draw on any lines of symmetry.5 friends share £18.20 equally.  
How much does each receive?

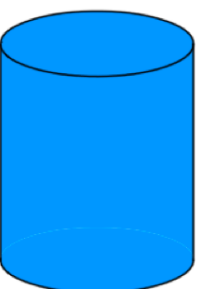
17th November



Write down the value of digit 4.

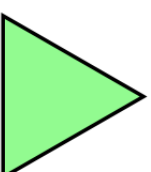
3942

Name this solid



$$\frac{3}{15} = \frac{12}{\square}$$

$$\frac{12}{20} = \frac{\square}{5}$$

Shown is an equilateral triangle.  
Draw on any lines of symmetry.5 friends share £18.20 equally.  
How much does each receive?