

Name: \_\_\_\_\_

5-a-day

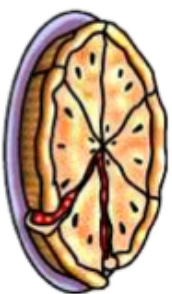
Numeracy

**29th November**



Harry buys a motorcycle for £2000.  
He pays for it over 4 equal monthly payments.

How much does he pay each month?




A pie is cut into 6 equal slices.  
One slice is eaten.

What fraction is left?

Write down the 15th odd number

The perimeter of the rectangle is 20cm.  
Find x



There are 8200 fans at a rugby match between Bath and Newcastle.

Work out how many male fans support Newcastle.

3600 of the fans are female.  
The rest of the fans are male.  
 $\frac{1}{4}$  of the male fans support Newcastle.

Name: \_\_\_\_\_

5-a-day

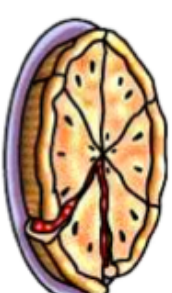
Numeracy

**29th November**



Harry buys a motorcycle for £2000.  
He pays for it over 4 equal monthly payments.

How much does he pay each month?




A pie is cut into 6 equal slices.  
One slice is eaten.

What fraction is left?

Write down the 15th odd number

The perimeter of the rectangle is 20cm.  
Find x



There are 8200 fans at a rugby match between Bath and Newcastle.

Work out how many male fans support Newcastle.

3600 of the fans are female.  
The rest of the fans are male.  
 $\frac{1}{4}$  of the male fans support Newcastle.