
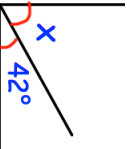


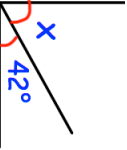



5th November												
Work out the product of 12 and 3	Work out the difference between 90 and 35	Corbettmaths										
	Find x											
<p>A footballer plays 20 matches in a season. In each match he plays 90 minutes.</p> <p>Work out the total number of minutes he played.</p>												
<p>Raffle Tickets 40p each</p> <p>Georgia sells 5 books of raffle tickets. There are 10 tickets in each book.</p>	How much money does Georgia raise?											
<table border="1"> <tr> <td>France</td> <td>Germany</td> <td>Poland</td> <td>Portugal</td> <td>Spain</td> </tr> <tr> <td>Medals won</td> <td>34</td> <td>44</td> <td>1</td> <td>17</td> </tr> </table> <p>The table shows how many medals were won in the 2012 olympics by 5 countries.</p>	France	Germany	Poland	Portugal	Spain	Medals won	34	44	1	17	<p>The total number of medals won by these countries was 106.</p> <p>How many medals did Poland win?</p>	
France	Germany	Poland	Portugal	Spain								
Medals won	34	44	1	17								

5th November												
Work out the product of 12 and 3	Work out the difference between 90 and 35	Corbettmaths										
	Find x											
<p>A footballer plays 20 matches in a season. In each match he plays 90 minutes.</p> <p>Work out the total number of minutes he played.</p>												
<p>Raffle Tickets 40p each</p> <p>Georgia sells 5 books of raffle tickets. There are 10 tickets in each book.</p>	How much money does Georgia raise?											
<table border="1"> <tr> <td>France</td> <td>Germany</td> <td>Poland</td> <td>Portugal</td> <td>Spain</td> </tr> <tr> <td>Medals won</td> <td>34</td> <td>44</td> <td>1</td> <td>17</td> </tr> </table> <p>The table shows how many medals were won in the 2012 olympics by 5 countries.</p>	France	Germany	Poland	Portugal	Spain	Medals won	34	44	1	17	<p>The total number of medals won by these countries was 106.</p> <p>How many medals did Poland win?</p>	
France	Germany	Poland	Portugal	Spain								
Medals won	34	44	1	17								