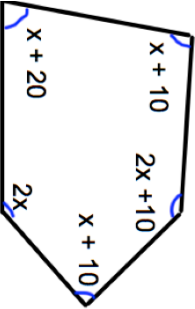
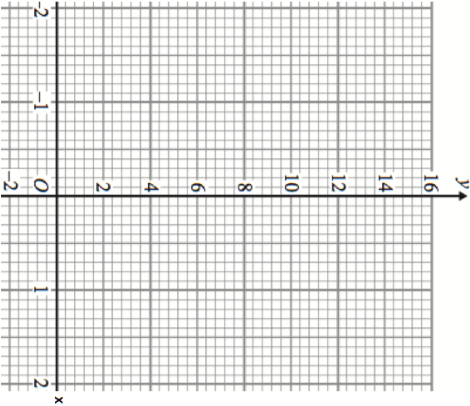
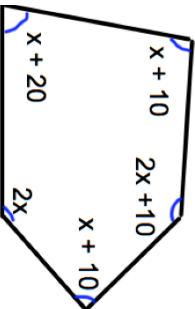
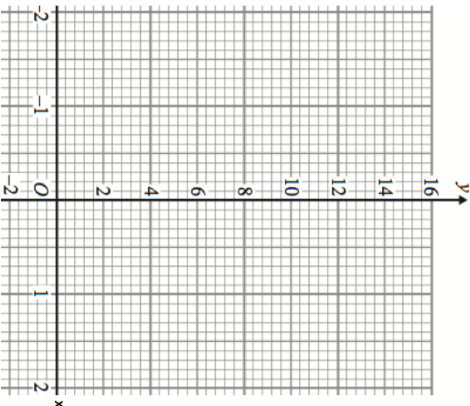


<p>5th October</p> 	<p>Find x</p> <p style="text-align: right;">Corbettmaths</p>												
<p>Complete the table of values for $y = 3x^2 + 1$ and draw the graph</p> <table border="1" data-bbox="967 143 1027 551"> <tr> <td>x</td> <td>-2</td> <td>-1</td> <td>0</td> <td>1</td> <td>2</td> </tr> <tr> <td>y</td> <td>13</td> <td></td> <td>1</td> <td>4</td> <td></td> </tr> </table>	x	-2	-1	0	1	2	y	13		1	4		
x	-2	-1	0	1	2								
y	13		1	4									
<table border="1" data-bbox="501 143 651 389"> <thead> <tr> <th>Shape</th> <th>Probability</th> </tr> </thead> <tbody> <tr> <td>Circle</td> <td>0.1</td> </tr> <tr> <td>Triangle</td> <td>0.3</td> </tr> <tr> <td>Square</td> <td></td> </tr> <tr> <td>Rectangle</td> <td></td> </tr> </tbody> </table> <p>A bag contains 4 different shapes.</p>	Shape	Probability	Circle	0.1	Triangle	0.3	Square		Rectangle		<p>The probability of choosing a square is three times more likely than choosing a rectangle.</p> <p>Complete the table.</p>		
Shape	Probability												
Circle	0.1												
Triangle	0.3												
Square													
Rectangle													
<p>Calculate the gradient of the straight line passing through (0, 2) and (3, 11).</p>	<p>Write down the equation of the line.</p>												

<p>5th October</p> 	<p>Find x</p> <p style="text-align: right;">Corbettmaths</p>												
<p>Complete the table of values for $y = 3x^2 + 1$ and draw the graph</p> <table border="1" data-bbox="967 1234 1027 1641"> <tr> <td>x</td> <td>-2</td> <td>-1</td> <td>0</td> <td>1</td> <td>2</td> </tr> <tr> <td>y</td> <td>13</td> <td></td> <td>1</td> <td>4</td> <td></td> </tr> </table>	x	-2	-1	0	1	2	y	13		1	4		
x	-2	-1	0	1	2								
y	13		1	4									
<table border="1" data-bbox="501 1234 651 1480"> <thead> <tr> <th>Shape</th> <th>Probability</th> </tr> </thead> <tbody> <tr> <td>Circle</td> <td>0.1</td> </tr> <tr> <td>Triangle</td> <td>0.3</td> </tr> <tr> <td>Square</td> <td></td> </tr> <tr> <td>Rectangle</td> <td></td> </tr> </tbody> </table> <p>A bag contains 4 different shapes.</p>	Shape	Probability	Circle	0.1	Triangle	0.3	Square		Rectangle		<p>The probability of choosing a square is three times more likely than choosing a rectangle.</p> <p>Complete the table.</p>		
Shape	Probability												
Circle	0.1												
Triangle	0.3												
Square													
Rectangle													
<p>Calculate the gradient of the straight line passing through (0, 2) and (3, 11).</p>	<p>Write down the equation of the line.</p>												