
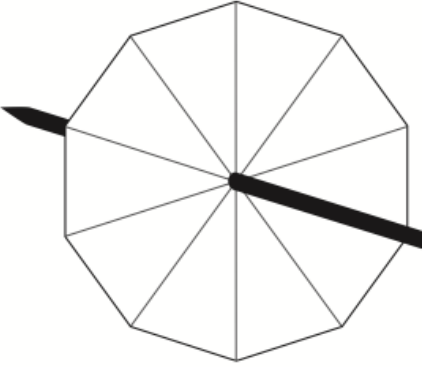

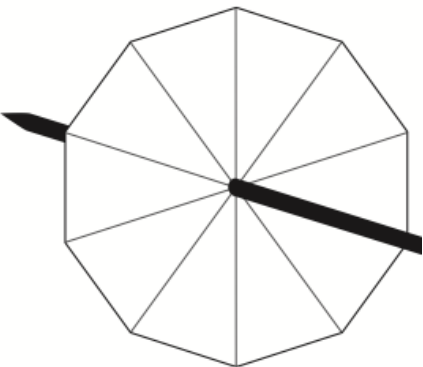


<b>11th October</b> 		<p>This spinner has 10 equal sections.</p> <p>Label the spinner so that:</p> <ul style="list-style-type: none"> <li>- It has an even chance of landing on an odd number.</li> <li>- An 8 is more likely than a 4.</li> <li>- An 8 and a 7 are equally likely.</li> <li>- It is impossible to get a number above 8.</li> </ul>
<p>Alison changes £16 into American dollars. The exchange rate is £1 to \$1.40</p> <p>How many American dollars does Alison receive?</p>		
<p>A scale drawing has a scale of 1:20 In real life the length of a boat is 150m</p> <p>What is the length of the boat on the scale drawing?</p> <p>Give your answer in centimetres.</p>		
<p>Write 72 as a product of primes</p>		

<b>11th October</b> 		<p>This spinner has 10 equal sections.</p> <p>Label the spinner so that:</p> <ul style="list-style-type: none"> <li>- It has an even chance of landing on an odd number.</li> <li>- An 8 is more likely than a 4.</li> <li>- An 8 and a 7 are equally likely.</li> <li>- It is impossible to get a number above 8.</li> </ul>
<p>Alison changes £16 into American dollars. The exchange rate is £1 to \$1.40</p> <p>How many American dollars does Alison receive?</p>		
<p>A scale drawing has a scale of 1:20 In real life the length of a boat is 150m</p> <p>What is the length of the boat on the scale drawing?</p> <p>Give your answer in centimetres.</p>		
<p>Write 72 as a product of primes</p>		