
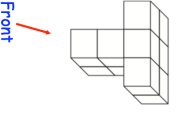
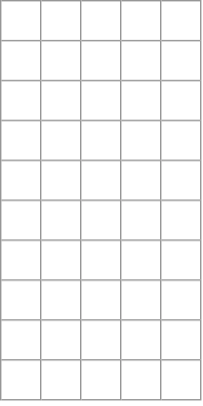
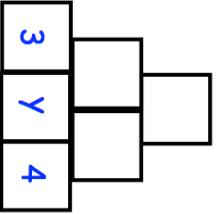

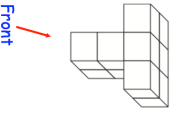
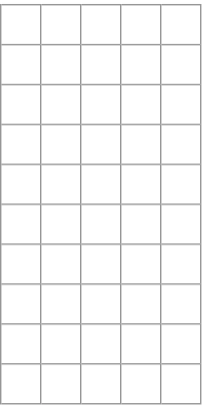


12th October																				
Corbettmaths 																				
<table border="1"> <tr> <td>Foxkown</td> <td>Sandcliff</td> <td>Red Island</td> <td>Donhampton</td> </tr> <tr> <td>52</td> <td>32</td> <td></td> <td></td> </tr> <tr> <td>70</td> <td>14</td> <td>28</td> <td></td> </tr> <tr> <td>31</td> <td></td> <td></td> <td></td> </tr> </table>	Foxkown	Sandcliff	Red Island	Donhampton	52	32			70	14	28		31				Write down the distance from Sandcliff to Donhampton.			
Foxkown	Sandcliff	Red Island	Donhampton																	
52	32																			
70	14	28																		
31																				
Which two towns are the furthest apart?	Martin visits his friend and returns home. He has travelled 64 miles in total. Where do they live?																			
$\frac{3}{4} + \frac{1}{12}$	$\frac{5}{14} \times \frac{3}{4}$																			
 <p>Draw the plan view</p>																				
To find the contents of each empty box, multiply the two terms directly beneath it. Complete the multiplication pyramid.																				

12th October																				
Corbettmaths 																				
<table border="1"> <tr> <td>Foxkown</td> <td>Sandcliff</td> <td>Red Island</td> <td>Donhampton</td> </tr> <tr> <td>52</td> <td>32</td> <td></td> <td></td> </tr> <tr> <td>70</td> <td>14</td> <td>28</td> <td></td> </tr> <tr> <td>31</td> <td></td> <td></td> <td></td> </tr> </table>	Foxkown	Sandcliff	Red Island	Donhampton	52	32			70	14	28		31				Write down the distance from Sandcliff to Donhampton.			
Foxkown	Sandcliff	Red Island	Donhampton																	
52	32																			
70	14	28																		
31																				
Which two towns are the furthest apart?	Martin visits his friend and returns home. He has travelled 64 miles in total. Where do they live?																			
$\frac{3}{4} + \frac{1}{12}$	$\frac{5}{14} \times \frac{3}{4}$																			
 <p>Draw the plan view</p>																				
To find the contents of each empty box, multiply the two terms directly beneath it. Complete the multiplication pyramid.	