

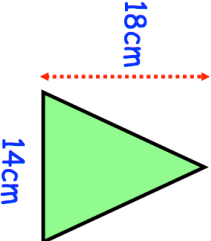



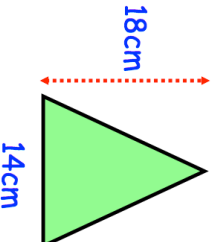


2nd October	Corbettmaths 		
	Write down the order of rotational symmetry of the shape shown		
Calculate the area of the triangle			
$\frac{3}{5} - \frac{2}{7}$	$\frac{3}{4} + \frac{2}{9}$		
Mr. Jones needs a plumber. The job should take 4 hours. Which company should he hire?	<table border="1" style="width: 100%;"> <tr> <td style="width: 50%; padding: 5px;"> Plumbers'R'us £50 call out charge + £30 per hour </td> <td style="width: 50%; padding: 5px;"> Plumb 4 u £40 per hour </td> </tr> </table>	Plumbers'R'us £50 call out charge + £30 per hour	Plumb 4 u £40 per hour
Plumbers'R'us £50 call out charge + £30 per hour	Plumb 4 u £40 per hour		
Shown is a number line. What number is the arrow pointing to?			

2nd October	Corbettmaths 		
	Write down the order of rotational symmetry of the shape shown		
Calculate the area of the triangle			
$\frac{3}{5} - \frac{2}{7}$	$\frac{3}{4} + \frac{2}{9}$		
Mr. Jones needs a plumber. The job should take 4 hours. Which company should he hire?	<table border="1" style="width: 100%;"> <tr> <td style="width: 50%; padding: 5px;"> Plumbers'R'us £50 call out charge + £30 per hour </td> <td style="width: 50%; padding: 5px;"> Plumb 4 u £40 per hour </td> </tr> </table>	Plumbers'R'us £50 call out charge + £30 per hour	Plumb 4 u £40 per hour
Plumbers'R'us £50 call out charge + £30 per hour	Plumb 4 u £40 per hour		
Shown is a number line. What number is the arrow pointing to?	