
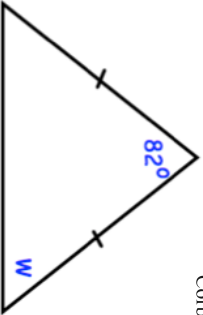

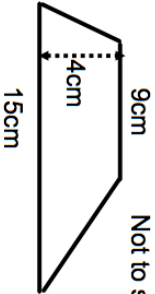

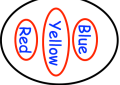

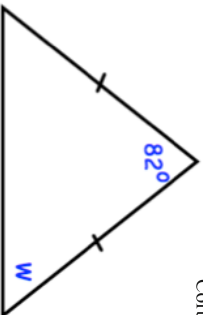

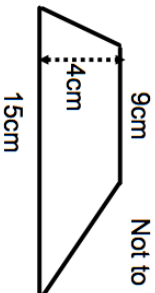
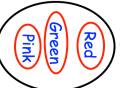
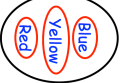


23rd October			
Find w			
Here is a list of quadrilaterals. kite rectangle rhombus square parallelogram	All four sides are the same length. There are no right angles.		
For the following description, choose the correct name from the list.			
Calculate the area of the trapezium.			
			
Rob takes a counter at random from bag 1 and a counter at random from bag 2.	Write a list of all the possible combinations of the two counters that Rob can take.		
Is time taken to read a book discrete or continuous data? Tick a box.			
Discrete <input type="checkbox"/>			
Continuous <input type="checkbox"/>			
Give a reason for your answer.			

23rd October			
Find w			
Here is a list of quadrilaterals. kite rectangle rhombus square parallelogram	All four sides are the same length. There are no right angles.		
For the following description, choose the correct name from the list.			
Calculate the area of the trapezium.			
			
Rob takes a counter at random from bag 1 and a counter at random from bag 2.	Write a list of all the possible combinations of the two counters that Rob can take.		
Is time taken to read a book discrete or continuous data? Tick a box.			
Discrete <input type="checkbox"/>			
Continuous <input type="checkbox"/>			
Give a reason for your answer.			