




Name: _____

5-a-day




Foundation

30th October		 Corbettmaths																																																									
Amie sells cars. She is paid £9 an hour and is paid a £50 bonus for each car sold. One week, Amie worked for 6 hours and sold 3 cars.	How much was her pay?																																																										
	The next week, Amie was paid £295. How many hours did she work and how many cars did she sell? Hours _____ Cars _____																																																										
Two fair six sided dice are rolled.  The numbers on the two dice are multiplied together to give a score. Complete the table	<table border="1" style="margin-left: auto; margin-right: auto;"> <tr> <td></td> <td colspan="6" style="text-align: center;">Dice 1</td> </tr> <tr> <td style="text-align: center;">x</td> <td>1</td> <td>2</td> <td>3</td> <td>4</td> <td>5</td> <td>6</td> </tr> <tr> <td style="text-align: center;">Dice 2</td> <td>1</td> <td></td> <td></td> <td></td> <td></td> <td></td> </tr> <tr> <td></td> <td>2</td> <td></td> <td></td> <td></td> <td></td> <td></td> </tr> <tr> <td></td> <td>3</td> <td></td> <td></td> <td></td> <td></td> <td></td> </tr> <tr> <td></td> <td>4</td> <td></td> <td></td> <td></td> <td></td> <td></td> </tr> <tr> <td></td> <td>5</td> <td></td> <td></td> <td></td> <td></td> <td></td> </tr> <tr> <td></td> <td>6</td> <td></td> <td></td> <td></td> <td></td> <td></td> </tr> </table>		Dice 1						x	1	2	3	4	5	6	Dice 2	1							2							3							4							5							6							
	Dice 1																																																										
x	1	2	3	4	5	6																																																					
Dice 2	1																																																										
	2																																																										
	3																																																										
	4																																																										
	5																																																										
	6																																																										
Find the probability of a score of 8	Find the probability of a score of 8 or more																																																										
14 17 20 23																																																											
Work out the <i>n</i> th term and 100th term																																																											

Name: _____

5-a-day

Foundation

30th October		 Corbettmaths																																																									
Amie sells cars. She is paid £9 an hour and is paid a £50 bonus for each car sold. One week, Amie worked for 6 hours and sold 3 cars.	How much was her pay?																																																										
	The next week, Amie was paid £295. How many hours did she work and how many cars did she sell? Hours _____ Cars _____																																																										
Two fair six sided dice are rolled.  The numbers on the two dice are multiplied together to give a score. Complete the table	<table border="1" style="margin-left: auto; margin-right: auto;"> <tr> <td></td> <td colspan="6" style="text-align: center;">Dice 1</td> </tr> <tr> <td style="text-align: center;">x</td> <td>1</td> <td>2</td> <td>3</td> <td>4</td> <td>5</td> <td>6</td> </tr> <tr> <td style="text-align: center;">Dice 2</td> <td>1</td> <td></td> <td></td> <td></td> <td></td> <td></td> </tr> <tr> <td></td> <td>2</td> <td></td> <td></td> <td></td> <td></td> <td></td> </tr> <tr> <td></td> <td>3</td> <td></td> <td></td> <td></td> <td></td> <td></td> </tr> <tr> <td></td> <td>4</td> <td></td> <td></td> <td></td> <td></td> <td></td> </tr> <tr> <td></td> <td>5</td> <td></td> <td></td> <td></td> <td></td> <td></td> </tr> <tr> <td></td> <td>6</td> <td></td> <td></td> <td></td> <td></td> <td></td> </tr> </table>		Dice 1						x	1	2	3	4	5	6	Dice 2	1							2							3							4							5							6							
	Dice 1																																																										
x	1	2	3	4	5	6																																																					
Dice 2	1																																																										
	2																																																										
	3																																																										
	4																																																										
	5																																																										
	6																																																										
Find the probability of a score of 8	Find the probability of a score of 8 or more																																																										
14 17 20 23																																																											
Work out the <i>n</i> th term and 100th term																																																											