

**31st October**

A blue light flashes every 6 seconds.

A green light flashes every 8 seconds.

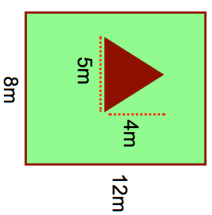
After how many seconds will they both flash at the same time?

Transport	Tally	Frequency
Walk	III II	
Cycle	III	
Bus	III III II	
Car	III III	

How many students are in the class?

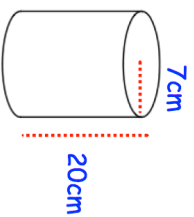
Complete the tally chart.

What fraction of the students cycle to school?



Calculate the percentage of the garden that is grass.

Calculate the volume

**31st October**

A blue light flashes every 6 seconds.

A green light flashes every 8 seconds.

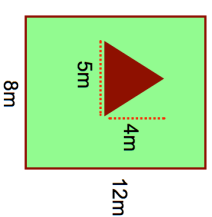
After how many seconds will they both flash at the same time?

Transport	Tally	Frequency
Walk	III II	
Cycle	III	
Bus	III III II	
Car	III III	

How many students are in the class?

Complete the tally chart.

What fraction of the students cycle to school?



Calculate the percentage of the garden that is grass.

Calculate the volume

