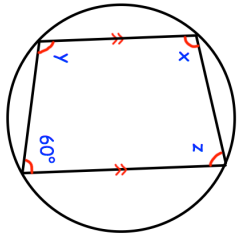
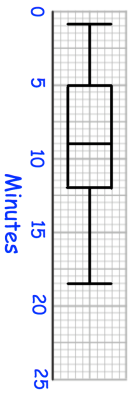
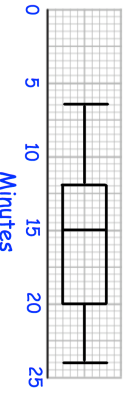
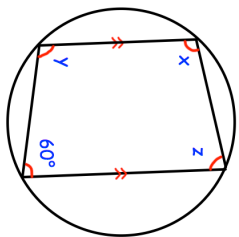
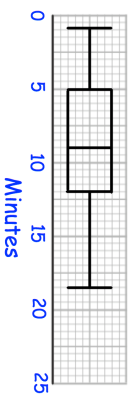
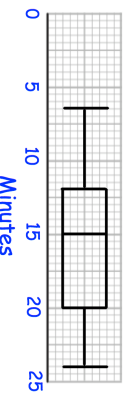


| | |
|----------------------------------------------------------------------------------------------------------------------------------------------------------------------------------------------------------------------------------------------------------------------------------|---------------------------------------------------------------------------------------------------------------------------------------|
| <p>3rd October</p>  | <p>Find x, y and z</p> <p style="text-align: right;">Corbettmaths</p> |
| <p>Time taken to complete puzzle - Children</p>  <p>Time taken to complete puzzle - Adults</p>  | <p>Shown are the times taken to complete a puzzle by a group of children and a group of adults.</p> <p>Compare the distributions.</p> |
| <p>A restaurant menu has 5 starters, 10 mains and 4 desserts.</p> <p>A customer can choose:</p> <ul style="list-style-type: none"> - a starter and a main - a main and a dessert - a starter, a main and a dessert | <p>How many different ways of choosing a meal are there?</p> |
| <p>Jack is taking penalties.</p> <p>The probability that he scores is 0.8</p> <p>He takes two penalties.</p> <p>Work out the probability that he scores exactly once.</p> | |

| | |
|--------------------------------------------------------------------------------------------------------------------------------------------------------------------------------------------------------------------------------------------------------------------------------------|---------------------------------------------------------------------------------------------------------------------------------------|
| <p>3rd October</p>  | <p>Find x, y and z</p> <p style="text-align: right;">Corbettmaths</p> |
| <p>Time taken to complete puzzle - Children</p>  <p>Time taken to complete puzzle - Adults</p>  | <p>Shown are the times taken to complete a puzzle by a group of children and a group of adults.</p> <p>Compare the distributions.</p> |
| <p>A restaurant menu has 5 starters, 10 mains and 4 desserts.</p> <p>A customer can choose:</p> <ul style="list-style-type: none"> - a starter and a main - a main and a dessert - a starter, a main and a dessert | <p>How many different ways of choosing a meal are there?</p> |
| <p>Jack is taking penalties.</p> <p>The probability that he scores is 0.8</p> <p>He takes two penalties.</p> <p>Work out the probability that he scores exactly once.</p> | |