
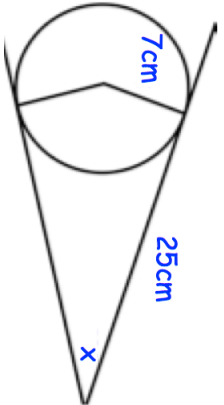

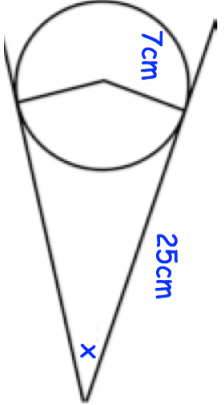


8th October	Corbettmaths 
Find the range of values of x that satisfies both	
$3(x + 2) \leq 30$ and $4x + 3 > 21$	
A dice is rolled. A coin is flipped.	
What is the probability of getting a tail and a prime number?	
Simplify	
$9\sqrt{35} \div 3\sqrt{5}$	
	Shown is a circle, two tangents and two radii. Find the size of the angle marked x .
Evaluate	
$125 \frac{2}{3}$	

8th October	Corbettmaths 
Find the range of values of x that satisfies both	
$3(x + 2) \leq 30$ and $4x + 3 > 21$	
A dice is rolled. A coin is flipped.	
What is the probability of getting a tail and a prime number?	
Simplify	
$9\sqrt{35} \div 3\sqrt{5}$	
	Shown is a circle, two tangents and two radii. Find the size of the angle marked x .
Evaluate	
$125 \frac{2}{3}$	