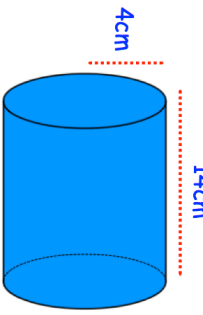
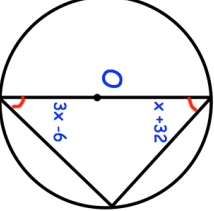
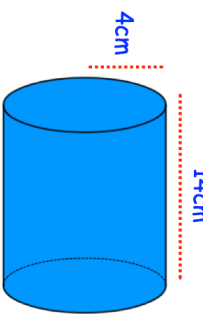
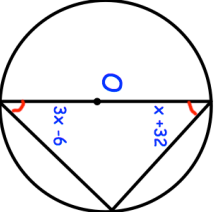


3rd September	Corbettmaths
	Calculate the surface area
<p>Line 1 : $y = 3x + 1$ Line 2 : $y = 2x - 3$ Line 3 : $3y + x = 6$ Line 4 : $y = \frac{1}{3}x - 1$</p>	Which lines are perpendicular?
$W^0 \quad W^3 \quad \frac{W^3}{W^4} \quad W^{-2}$ <p>W is greater than 1. Write in ascending order.</p>	
	Find x
<p>The volumes of two mathematically similar solids are in the ratio 8 : 125 The surface area of the smaller solid is 24 cm² Work out the surface area of the larger solid.</p>	

3rd September	Corbettmaths
	Calculate the surface area
<p>Line 1 : $y = 3x + 1$ Line 2 : $y = 2x - 3$ Line 3 : $3y + x = 6$ Line 4 : $y = \frac{1}{3}x - 1$</p>	Which lines are perpendicular?
$W^0 \quad W^3 \quad \frac{W^3}{W^4} \quad W^{-2}$ <p>W is greater than 1. Write in ascending order.</p>	
	Find x
<p>The volumes of two mathematically similar solids are in the ratio 8 : 125 The surface area of the smaller solid is 24 cm² Work out the surface area of the larger solid.</p>	