
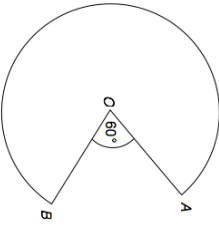
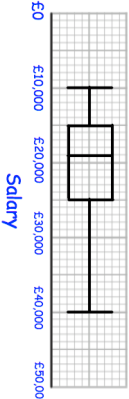

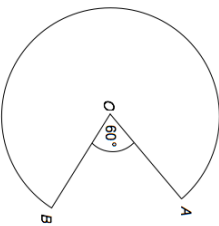
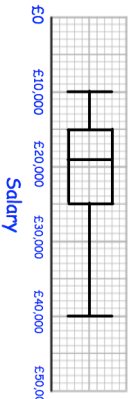


30th September	 Corbettmaths
Work out the equation of the line passing through A (0, 1) and B (2, 4).	Write down the equation of the line perpendicular to AB and passing through (0, 7)
	Angle AOB is 60° and OA is 10cm. Find the perimeter of the sector.
	Write down the value of the range
Solve $\frac{x}{2} + \frac{4x+1}{10} = -8$	
Material A has a density of 5.8g/cm ³ . Material B has a density of 4.1g/cm ³ . 377g of Material A and 1.64kg of Material B form Material C. Work out the density of Material C.	

30th September	 Corbettmaths
Work out the equation of the line passing through A (0, 1) and B (2, 4).	Write down the equation of the line perpendicular to AB and passing through (0, 7)
	Angle AOB is 60° and OA is 10cm. Find the perimeter of the sector.
	Write down the value of the range
Solve $\frac{x}{2} + \frac{4x+1}{10} = -8$	
Material A has a density of 5.8g/cm ³ . Material B has a density of 4.1g/cm ³ . 377g of Material A and 1.64kg of Material B form Material C. Work out the density of Material C.	