
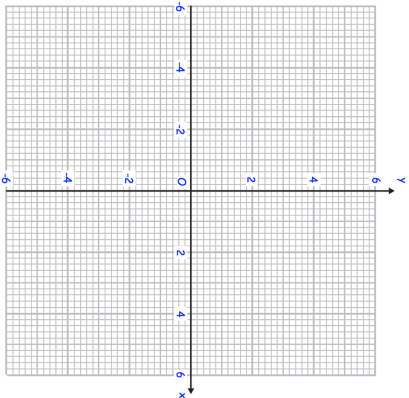
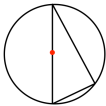
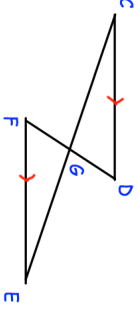

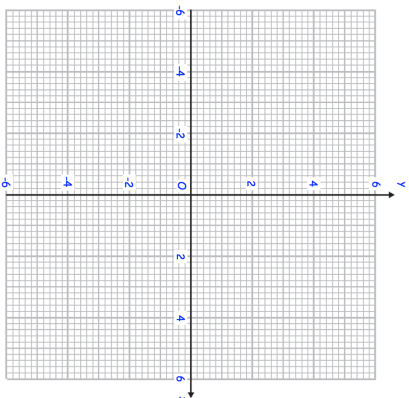
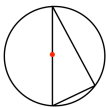
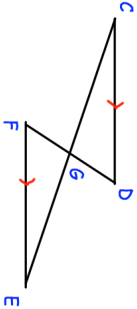


1st April	Corbettmaths 
	<p>Using the grid, solve the equations</p> $x^2 + y^2 = 9$ $x + y = 2$
<p>Given</p> $f(x) = \frac{x-9}{3}$ $g(x) = 5x - 7$	<p>Solve</p> $f^{-1}(x) = g(x)$
<p>Prove that the angle in a semi-circle is always 90°</p>	
	<p>In the diagram, the lines CE and DF intersect at G. CD and FE are parallel and $CD = FE$. Prove that triangles CDG and EFG are congruent.</p>

1st April	Corbettmaths 
	<p>Using the grid, solve the equations</p> $x^2 + y^2 = 9$ $x + y = 2$
<p>Given</p> $f(x) = \frac{x-9}{3}$ $g(x) = 5x - 7$	<p>Solve</p> $f^{-1}(x) = g(x)$
<p>Prove that the angle in a semi-circle is always 90°</p>	
	<p>In the diagram, the lines CE and DF intersect at G. CD and FE are parallel and $CD = FE$. Prove that triangles CDG and EFG are congruent.</p>