
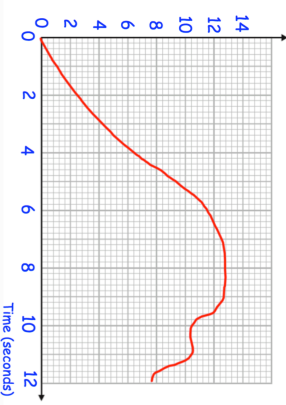



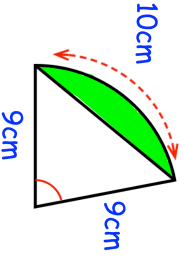

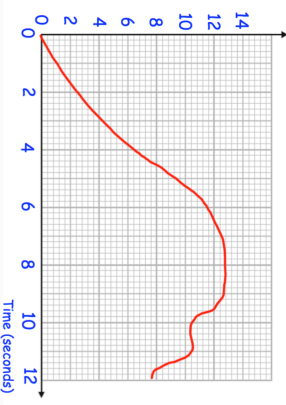



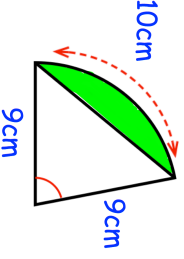


<p>13th April</p> <p style="text-align: right;">Corbettmaths </p>	
<p>Velocity m/s</p>  <p>Time (seconds)</p>	<p>Estimate the acceleration at $t = 4$</p>
<p>$w^4 < 25$ and $3y + w = 10$</p> <p>Find the possible range of values of y</p>	<p>Estimate the distance travelled over the first 6 seconds</p>
<p>Pattern 1 </p> <p>Pattern 2 </p> <p>Pattern 3 </p>	<p>How many tiles are needed to make Pattern 50?</p>
<p></p>	<p>Find the area of the segment</p>

<p>13th April</p> <p style="text-align: right;">Corbettmaths </p>	
<p>Velocity m/s</p>  <p>Time (seconds)</p>	<p>Estimate the acceleration at $t = 4$</p>
<p>$w^4 < 25$ and $3y + w = 10$</p> <p>Find the possible range of values of y</p>	<p>Estimate the distance travelled over the first 6 seconds</p>
<p>Pattern 1 </p> <p>Pattern 2 </p> <p>Pattern 3 </p>	<p>How many tiles are needed to make Pattern 50?</p>
<p></p>	<p>Find the area of the segment</p>