
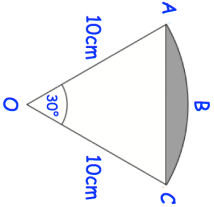

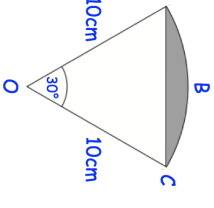


19th April		Corbettmaths 														
	Find the area of segment ABC															
<table border="1"> <thead> <tr> <th>Weight (x kg)</th> <th>Frequency</th> </tr> </thead> <tbody> <tr> <td>$60 < x \leq 64$</td> <td>10</td> </tr> <tr> <td>$64 < x \leq 68$</td> <td>20</td> </tr> <tr> <td>$68 < x \leq 72$</td> <td>30</td> </tr> <tr> <td>$72 < x \leq 76$</td> <td>15</td> </tr> <tr> <td>$76 < x \leq 80$</td> <td>18</td> </tr> <tr> <td>$80 < x \leq 84$</td> <td>7</td> </tr> </tbody> </table>	Weight (x kg)	Frequency	$60 < x \leq 64$	10	$64 < x \leq 68$	20	$68 < x \leq 72$	30	$72 < x \leq 76$	15	$76 < x \leq 80$	18	$80 < x \leq 84$	7	<p>The weights of some rugby players are recorded in the table.</p> <p>Find the median by using linear interpolation.</p>	
Weight (x kg)	Frequency															
$60 < x \leq 64$	10															
$64 < x \leq 68$	20															
$68 < x \leq 72$	30															
$72 < x \leq 76$	15															
$76 < x \leq 80$	18															
$80 < x \leq 84$	7															
<p>Two players are chosen at random. Calculate the probability that both players are over 80kg</p>																
<p>Find the set of values of x for which $x^2 - 36 > 0$ and $x^2 + 4x - 21 > 0$</p>																
<p>The line / is a tangent to the circle $x^2 + y^2 = 90$ at the point P. P is the point (3, 9) The line / crosses the x-axis at the point Q.</p>	Work out the area of triangle OPQ.															

19th April		Corbettmaths 														
	Find the area of segment ABC															
<table border="1"> <thead> <tr> <th>Weight (x kg)</th> <th>Frequency</th> </tr> </thead> <tbody> <tr> <td>$60 < x \leq 64$</td> <td>10</td> </tr> <tr> <td>$64 < x \leq 68$</td> <td>20</td> </tr> <tr> <td>$68 < x \leq 72$</td> <td>30</td> </tr> <tr> <td>$72 < x \leq 76$</td> <td>15</td> </tr> <tr> <td>$76 < x \leq 80$</td> <td>18</td> </tr> <tr> <td>$80 < x \leq 84$</td> <td>7</td> </tr> </tbody> </table>	Weight (x kg)	Frequency	$60 < x \leq 64$	10	$64 < x \leq 68$	20	$68 < x \leq 72$	30	$72 < x \leq 76$	15	$76 < x \leq 80$	18	$80 < x \leq 84$	7	<p>The weights of some rugby players are recorded in the table.</p> <p>Find the median by using linear interpolation.</p>	
Weight (x kg)	Frequency															
$60 < x \leq 64$	10															
$64 < x \leq 68$	20															
$68 < x \leq 72$	30															
$72 < x \leq 76$	15															
$76 < x \leq 80$	18															
$80 < x \leq 84$	7															
<p>Two players are chosen at random. Calculate the probability that both players are over 80kg</p>																
<p>Find the set of values of x for which $x^2 - 36 > 0$ and $x^2 + 4x - 21 > 0$</p>																
<p>The line / is a tangent to the circle $x^2 + y^2 = 90$ at the point P. P is the point (3, 9) The line / crosses the x-axis at the point Q.</p>	Work out the area of triangle OPQ.															