
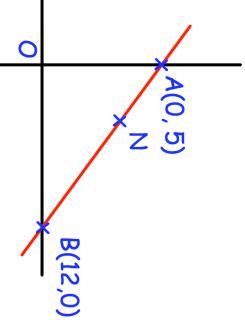

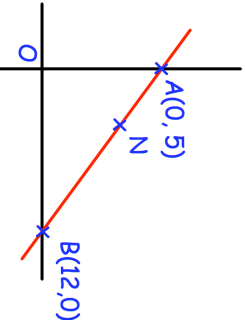


29th April	 Corbettmaths
 <p>AN:NB = 1:2</p> <p>Find the equation of the line perpendicular to AB that passes through the point N</p>	
<p>Work out the value of</p> $25^{-\frac{3}{2}}$	
<p>Expand and simplify</p> $(\sqrt{10} - \sqrt{3})(\sqrt{15} + \sqrt{2})$	
<p>Prove that the sum of the squares of two consecutive integers is one more than double the product of the integers</p>	

29th April	 Corbettmaths
 <p>AN:NB = 1:2</p> <p>Find the equation of the line perpendicular to AB that passes through the point N</p>	
<p>Work out the value of</p> $25^{-\frac{3}{2}}$	
<p>Expand and simplify</p> $(\sqrt{10} - \sqrt{3})(\sqrt{15} + \sqrt{2})$	
<p>Prove that the sum of the squares of two consecutive integers is one more than double the product of the integers</p>	