
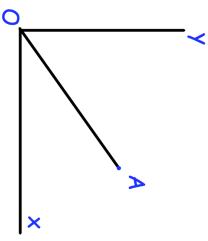

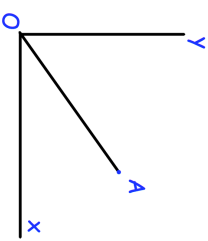


30th April			Corbettmaths 									
<table border="1"> <thead> <tr> <th></th> <th>French</th> <th>German</th> </tr> </thead> <tbody> <tr> <td>Female</td> <td>13</td> <td>15</td> </tr> <tr> <td>Male</td> <td>5</td> <td>17</td> </tr> </tbody> </table>		French	German	Female	13	15	Male	5	17	Three students are selected at random. Find the probability that all three are female.		
	French	German										
Female	13	15										
Male	5	17										
Two positive integers have a difference of 4. Prove the difference between the squares of the integers is four times the sum of the integers.												
Write 1.245454545... as a fraction												
												
Shown is a straight line joining O and A. The length of the line is $\sqrt{1805}$ The gradient of the line is $\frac{1}{2}$ Find the coordinates of A.												
The ratio of A to B is 1:400 where 400 is given to the nearest 100. B is 5×10^{15} correct to one significant figure												
Calculate the minimum value of A Give your answer in standard form.												

30th April			Corbettmaths 									
<table border="1"> <thead> <tr> <th></th> <th>French</th> <th>German</th> </tr> </thead> <tbody> <tr> <td>Female</td> <td>13</td> <td>15</td> </tr> <tr> <td>Male</td> <td>5</td> <td>17</td> </tr> </tbody> </table>		French	German	Female	13	15	Male	5	17	Three students are selected at random. Find the probability that all three are female.		
	French	German										
Female	13	15										
Male	5	17										
Two positive integers have a difference of 4. Prove the difference between the squares of the integers is four times the sum of the integers.												
Write 1.245454545... as a fraction												
												
Shown is a straight line joining O and A. The length of the line is $\sqrt{1805}$ The gradient of the line is $\frac{1}{2}$ Find the coordinates of A.												
The ratio of A to B is 1:400 where 400 is given to the nearest 100. B is 5×10^{15} correct to one significant figure												
Calculate the minimum value of A Give your answer in standard form.												