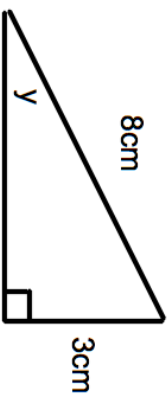

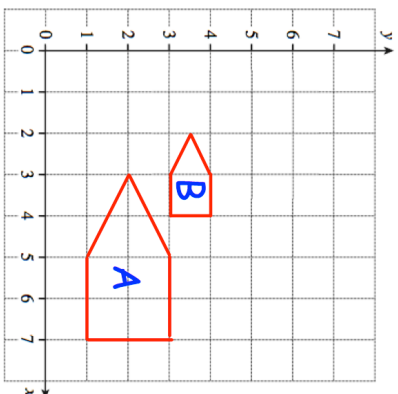
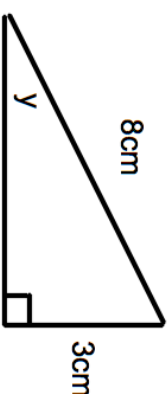

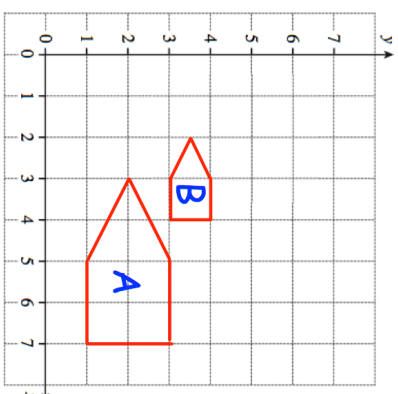


<p>1st August</p> 	<p>Calculate angle y</p> <p style="text-align: right;"> Corbettmaths</p>
	<p>Describe fully the single transformation that maps shape A onto shape B.</p> <p>Reflect shape B using $x = 4$ as the mirror line</p>
<p>There are three colours of beads in a bag. The ratio of red to yellow beads is 8:3 The ratio of green to yellow beads is 9:2.</p>	<p>What fraction of the beads are green?</p>
<p>Work out the reciprocal of 20. Give your answer as a decimal</p>	

<p>1st August</p> 	<p>Calculate angle y</p> <p style="text-align: right;"> Corbettmaths</p>
	<p>Describe fully the single transformation that maps shape A onto shape B.</p> <p>Reflect shape B using $x = 4$ as the mirror line</p>
<p>There are three colours of beads in a bag. The ratio of red to yellow beads is 8:3 The ratio of green to yellow beads is 9:2.</p>	<p>What fraction of the beads are green?</p>
<p>Work out the reciprocal of 20. Give your answer as a decimal</p>	