
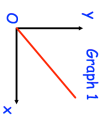
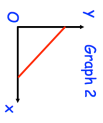
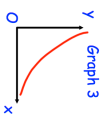
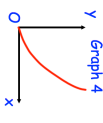
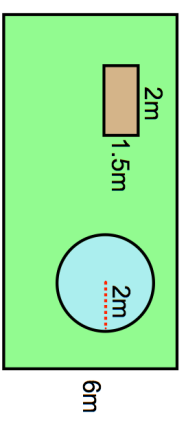

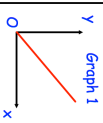
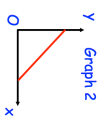
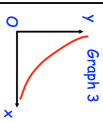
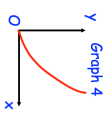
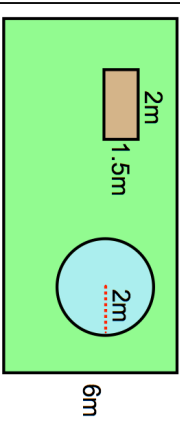


11th August	Make x the subject of	 Corbettmaths
$\sqrt[3]{\frac{x}{k}} = w$	 Graph 1  Graph 2  Graph 3  Graph 4	<p>One of the graphs shows that y is inversely proportional to x.</p> <p>Which graph?</p>
		<p>There is a circular pond that has radius 2 metres.</p> <p>The remainder of the garden is grass.</p> <p>Each bag of grass seed costs £4.60 and covers 10m².</p> <p>Work out the total cost to re-seed the garden.</p>
<p>Belle wants to re-seed the grass in her garden.</p> <p>The garden is 10 metres long and 6 metres wide.</p> <p>There is a vegetable patch that is 2 metres long and 1.5 metres long.</p>		
<p>The sum of Rosemary's age and Hannah's age is 102 years.</p> <p>The difference between their ages is 52 years.</p> <p>Hannah is younger than Rosemary.</p> <p>Find the age of each woman.</p>		

11th August	Make x the subject of	 Corbettmaths
$\sqrt[3]{\frac{x}{k}} = w$	 Graph 1  Graph 2  Graph 3  Graph 4	<p>One of the graphs shows that y is inversely proportional to x.</p> <p>Which graph?</p>
		<p>There is a circular pond that has radius 2 metres.</p> <p>The remainder of the garden is grass.</p> <p>Each bag of grass seed costs £4.60 and covers 10m².</p> <p>Work out the total cost to re-seed the garden.</p>
<p>Belle wants to re-seed the grass in her garden.</p> <p>The garden is 10 metres long and 6 metres wide.</p> <p>There is a vegetable patch that is 2 metres long and 1.5 metres long.</p>		
<p>The sum of Rosemary's age and Hannah's age is 102 years.</p> <p>The difference between their ages is 52 years.</p> <p>Hannah is younger than Rosemary.</p> <p>Find the age of each woman.</p>		